


MATH SALAMANDERS 3RD GRADE MATH GRAB PACK 2 ANSWERS



Here are answers to all the worksheets in 3rd Grade Math Grab Pack 2.

CONTENTS			
1	Adding 1, 10 and 100	6	Fun Multiplication to 10x10 Sheet 1
2	Number Fill In Puzzle 2	7	Easter Codebreaker 1A
3	Cross Color by Number Subtraction to 20	8	Row of Coins Challenge 3A
4	Bikes and Trikes puzzle	9	Round to the nearest 10 Sheet 2
5	Easter Egg Shape Color in 1	10	Mental Math Quiz 3:2

Please give us feedback on our pack – both what you liked and what sheets you would like to see more of by leaving a comment on the link below.

<https://www.math-salamanders.com/math-grab-packs.html>



ADDING 1, 10 AND 100 ANSWERS

NUMBER	+1	+10	+100
326	327	337	437
215	<u>216</u>	<u>226</u>	326
480	<u>481</u>	<u>491</u>	<u>591</u>
528	<u>529</u>	<u>539</u>	<u>639</u>
195	<u>196</u>	<u>206</u>	<u>306</u>
309	<u>310</u>	<u>320</u>	<u>420</u>
738	<u>739</u>	<u>749</u>	<u>849</u>
465	<u>466</u>	<u>476</u>	<u>576</u>
294	<u>295</u>	<u>305</u>	<u>405</u>
<u>316</u>	317	327	<u>427</u>
<u>551</u>	<u>552</u>	562	662
<u>263</u>	<u>264</u>	274	<u>374</u>
<u>191</u>	192	<u>202</u>	<u>302</u>
<u>492</u>	<u>493</u>	503	<u>513</u>
<u>603</u>	<u>604</u>	<u>614</u>	714



NUMBER FILL IN PUZZLE 2 ANSWERS

3		8		9	3	2	0	5			1
2	7	0	5	4		0		3	1	6	5
4		2		2		1		4			9
1		3	1	6	4	8		6			7
7			4		6		3	2	1	4	2
9	7	1	3	0	2		6			3	
	0				9	4	8	7		8	
3	6	4	8			5			5	2	7
	5		6	4	2	1	7		2		9
2			0		9		0		8		3
6	2	7	1		3		2	3	7	8	1
5			5	8	4				6		

3 DIGITS	4 DIGITS		5 DIGITS		6 DIGITS
143	2018	6271	15972	52876	324179
265	2934	7065	23781	53462	971302
368	3165	7931	27054	64217	
451	3648	8023	31648	86015	
527	4382	9426	32142	93205	
584	4629	9487			
702					



EASTER COLOR BY NUMBER: CROSS SUBTRACTION TO 20 COMPLETED

12-4	10-3	12-6	10-1	16-5	13-3	20-4	16-0	12-3	9-1	15-8	12-6	9-2	14-7	16-9	14-8
15-8	11-5	18-2	20-2	19-3	20-1	19-2	13-6	16-8	10-3	17-7	14-5	13-5	17-9	12-4	8-1
20-4	16-0	7-1	18-2	16-5	12-2	17-8	13-2	16-5	18-9	12-5	15-7	13-7	14-8	10-2	9-3
11-5	14-8	20-9	13-4	18-7	15-4	14-6	16-8	13-5	12-6	9-2	8-0	11-3	15-7	10-4	8-1
14-6	12-5	10-3	11-4	15-8	12-4	9-3	7-4	8-2	11-4	14-7	12-5	9-3	16-5	18-7	13-3
10-2	9-2	15-7	13-7	10-4	11-5	9-1	13-9	13-5	14-3	11-0	16-7	15-5	10-1	19-8	16-6
14-5	20-9	16-9	13-6	11-4	8-1	10-3	14-9	18-2	13-3	19-2	20-1	18-0	11-0	13-4	17-8
16-5	15-4	16-6	20-3	17-9	10-7	12-8	11-7	13-8	10-6	14-5	19-1	20-3	16-7	13-2	14-4
17-7	17-1	19-3	12-4	15-7	11-5	16-7	6-2	15-4	19-8	17-7	16-7	17-0	18-1	16-5	11-2
13-7	16-8	11-5	9-3	14-6	14-8	10-3	9-5	7-0	13-5	17-9	10-4	15-6	20-4	14-7	12-6
16-9	14-8	11-4	10-2	13-4	14-3	16-8	11-7	14-7	12-4	20-9	18-9	7-7	9-8	11-9	7-6
14-3	16-6	19-9	13-4	17-6	15-4	10-0	13-8	12-3	14-3	18-7	8-6	3-1	7-6	9-8	10-9
16-5	17-8	15-4	17-7	20-9	13-4	10-8	7-3	8-6	4-2	9-7	3-2	1-0	3-2	6-5	8-8
20-8	17-3	15-2	11-9	9-8	10-9	5-4	5-1	7-5	8-8	3-2	5-5	7-5	9-8	10-9	6-6
18-6	9-7	4-2	1-0	3-3	15-1	8-4	10-7	12-9	20-7	16-3	14-1	8-6	5-3	6-5	9-9
19-6	16-2	20-5	15-3	18-6	14-9	6-3	10-6	5-2	7-4	11-7	19-7	16-1	17-3	10-8	6-4
18-5	20-8	15-1	19-4	13-9	12-7	8-3	7-4	9-6	11-8	10-6	5-0	20-7	16-2	14-0	17-5
19-7	6-2	7-4	11-6	14-9	12-8	10-6	4-1	6-3	8-3	12-7	13-8	11-8	9-4	14-2	15-0
12-7	10-6	8-3	11-7	13-9	12-7	6-3	8-4	11-6	5-0	6-2	7-3	10-5	13-9	11-7	19-6
13-8	11-7	6-1	5-2	7-3	12-9	9-6	10-5	4-1	6-1	7-2	11-6	14-9	13-8	11-7	9-6

KEY		
0 to 2 brown	3 to 5 black	6 to 8 blue
9 to 11 gray	12 to 15 orange	16 to 20 white



BIKES AND TRIKES ANSWERS

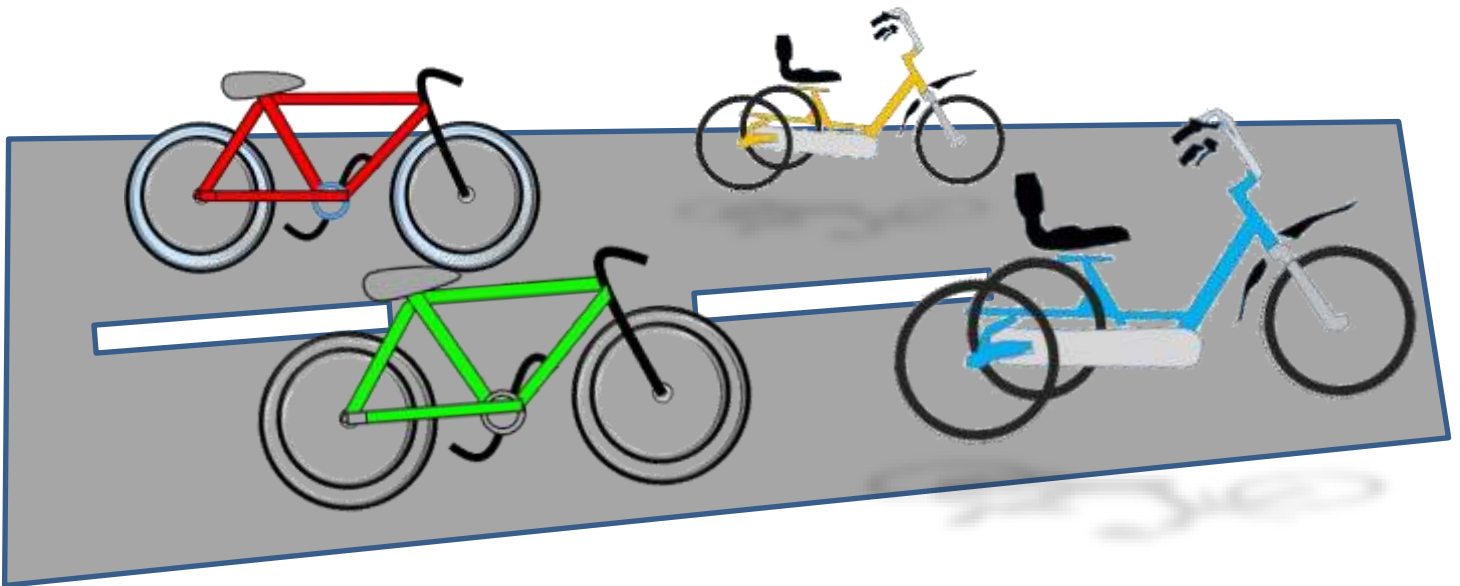
Frazer went to a bicycle show.

At the show there were some trikes (with 3 wheels) and bikes (with 2 wheels).

She counted 25 wheels altogether.

How many bikes and how many trikes were there?



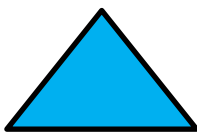


There are 4 different answers. See how many you can find.




- 1) 2 bikes and 7 trikes
- 2) 5 bikes and 5 trikes
- 3) 8 bikes and 3 trikes
- 4) 11 bikes and 1 trike




EASTER EGG SHAPE COLOR IN 1

Red	Pink	Blue	Green	Yellow
				



FUN MULTIPLICATION TO 10x10 SHEET 1 ANSWERS



EASTER CODEBREAKER 1A ANSWERS

ADDITION AND SUBTRACTION FACTS TO 20

Use the clues to work out the answer to the Easter joke.

A	B	C	D	E	H	I	L	M	O	R	S	T	U	W	Y	-	!
1	2	3	4	5	6	7	8	9	10	11	12	13	14	15	16	17	18

Why couldn't the Easter Egg Chicks watch tv?

Letter	B	E	C	A	U	S	E		T	H	-
Number	2	5	3	1	14	12	5		13	6	17
Fact	10-8	2+3	12-9	10-9	7+7	2+10	15-10		8+5	15-9	8+9

Letter	E	I	R		C	A	B	L	E		
Number	5	7	11		3	1	2	8	5		
Fact	13-8	11-4	3+8		17-14	8-7	15-13	2+6	14-9		

Letter	W	A	S		T	O	T	A	L	L	Y
Number	15	1	12		13	10	13	1	8	8	16
Fact	3+12	7-6	20-8		4+9	19-9	5+8	5-4	14-6	17-9	4+12

Letter	S	C	R	A	M	B	L	E	D	!	
Number	12	3	11	1	9	2	8	5	4	18	
Fact	5+7	12-9	8+3	8-7	16-7	11-9	20-12	2+3	12-8	10+8	



ROW OF COINS CHALLENGES 3A ANSWERS

CHALLENGE 1 ANSWER

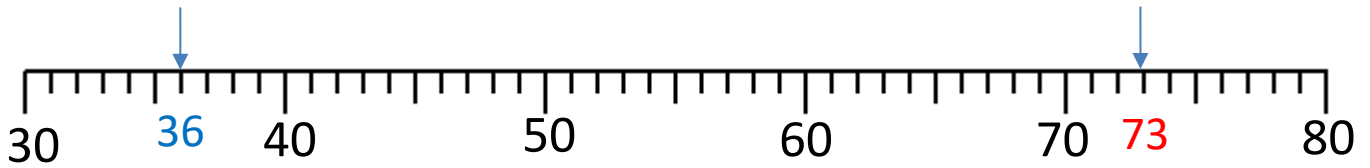


CHALLENGE 2 ANSWER



ROUNDING TO THE NEAREST 10 SHEET 2 ANSWERS

1)



36 to the nearest 10 is 40

73 to the nearest 10 is 70

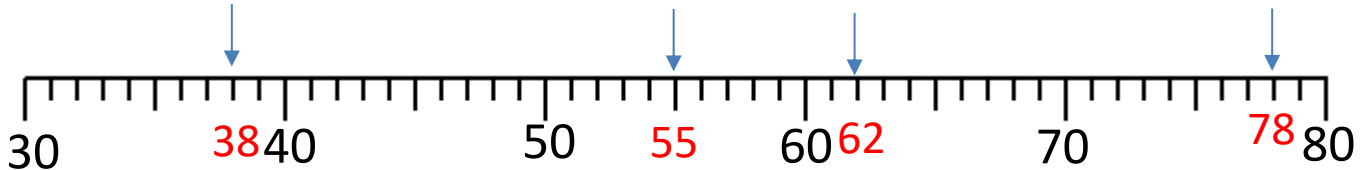
2)



45 to the nearest 10 is 50

64 to the nearest 10 is 60

3)



38 to the nearest 10 is 40

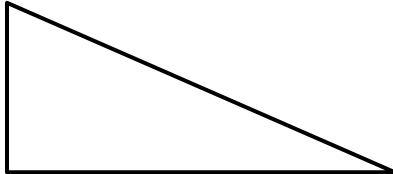
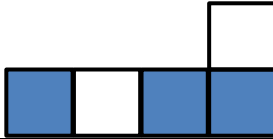
55 to the nearest 10 is 60

62 to the nearest 10 is 60

78 to the nearest 10 is 80



MENTAL MATH QUIZ 3:2 ANSWERS

1)	$500 + 70 + 4$	574
2)	Half of 30	15
3)	What is this triangle called?	right triangle
		
4)	$30 - 6$	24
5)	What is the value of the digit 7 in the number 1726	700
6)	Double 14	28
7)	5×6	30
8)	Write down all the odd numbers from the list below 42, 37, 21, 26, 38, 63	37, 21, 63
9)	Round 67 to the nearest 10.	70
10)	What number comes halfway between 30 and 50?	40
11)	How many nickels make 30¢?	6
12)	The time is 4:30pm. What will the time be in half an hour?	5:00pm
13)	How much is 3 dimes and 3 nickels?	45¢
14)	What fraction of this shape is shaded?	$\frac{3}{5}$
		
15)	I am facing north. I turn 2 half turns. Which way am I facing now?	north
16)	How many inches in 2 foot?	24 inches