


MATH SALAMANDERS FIRST GRADE MATH GRAB PACK 5 ANSWERS



Here are the answers to all the worksheets in
First Grade Math Grab Pack 5.

CONTENTS			
1	Place Value Tens and Ones 3	7	Teddy Bear Dot-to-Dot to 48
2	Place Value to 20 Sheet 4	8	Bar Graphs 1B
3	5 Circles Puzzle 1	9	Adding with Tens Sheet 2
4	Count and Order Sheet 2	10	Mental Math Sheet 1:5
5	Number Lines to 100 Sheet 2		
6	The Two Chests Puzzle 1		

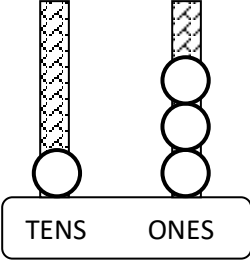
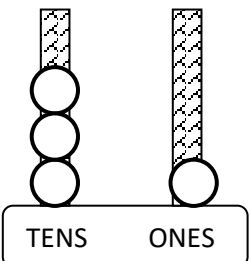
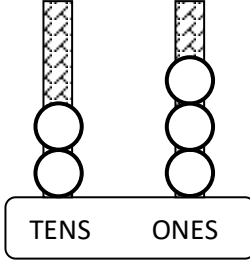
Please give us feedback on our pack – both what you liked and what sheets you would like to see more of by leaving a comment on the link below.

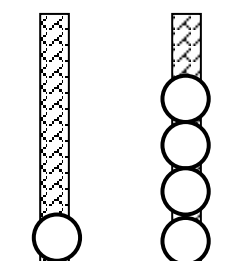
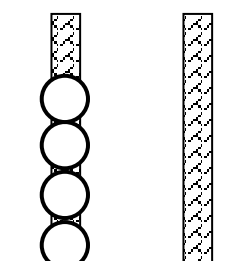
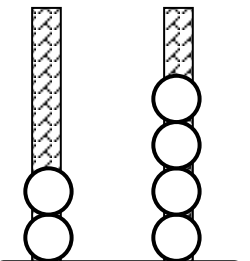
<https://www.math-salamanders.com/math-grab-packs.html>



PLACE VALUE - TENS AND ONES 3 ANSWERS

Count the number of TENS and ONES and then put them together.
Remember to count the TENS first, then the ONES.

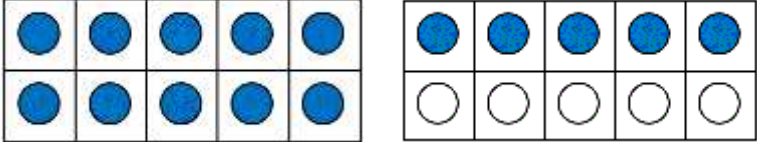
1) 	2) 	3) 
How many? <u>13</u>	How many? <u>31</u>	How many? <u>23</u>

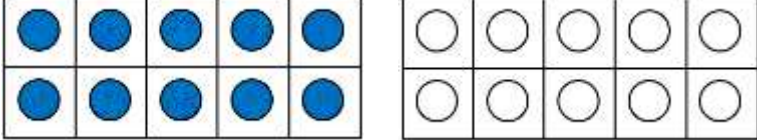
		
How many? <u>14</u>	How many? <u>40</u>	How many? <u>24</u>

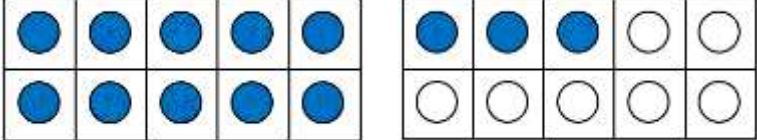
7) 2 TENS and 2 ONES	8) 1 TENS and 6 ONES	9) 3 TENS and 2 ONES
How many? <u>22</u>	How many? <u>16</u>	How many? <u>32</u>

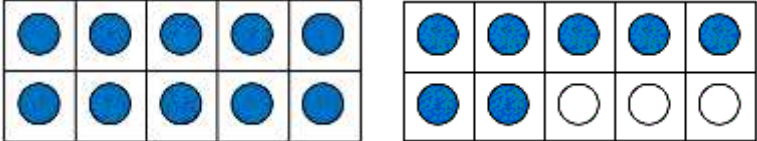
10) 5 TENS	11) 2 TENS and 3 ONES	12) 4 TENS and 1 ONE
How many? <u>50</u>	How many? <u>23</u>	How many? <u>41</u>

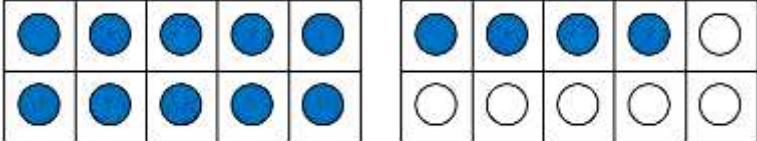
PLACE VALUE TO 20 SHEET 4 ANSWERS

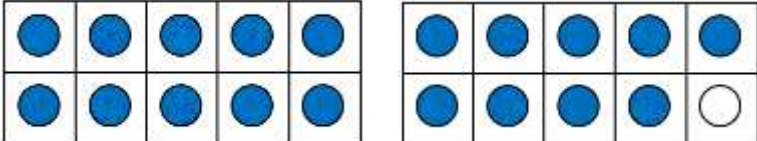
1) 15 =  = 1 ten 5 ones

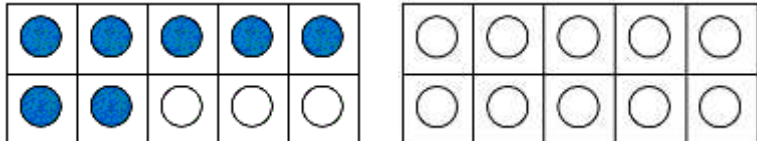
2) 10 =  = 1 ten 0 ones

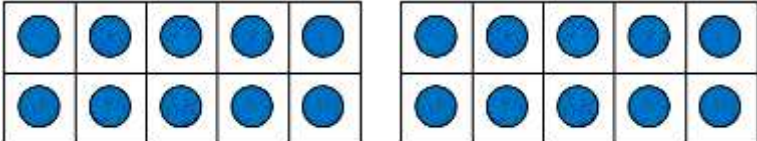
3) 13 =  = 1 ten 3 ones

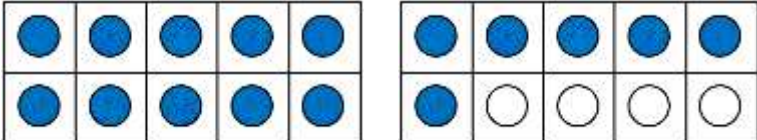
4) 17 =  = 1 ten 7 ones

5) 14 =  = 1 ten 4 ones

6) 19 =  = 1 ten 9 ones

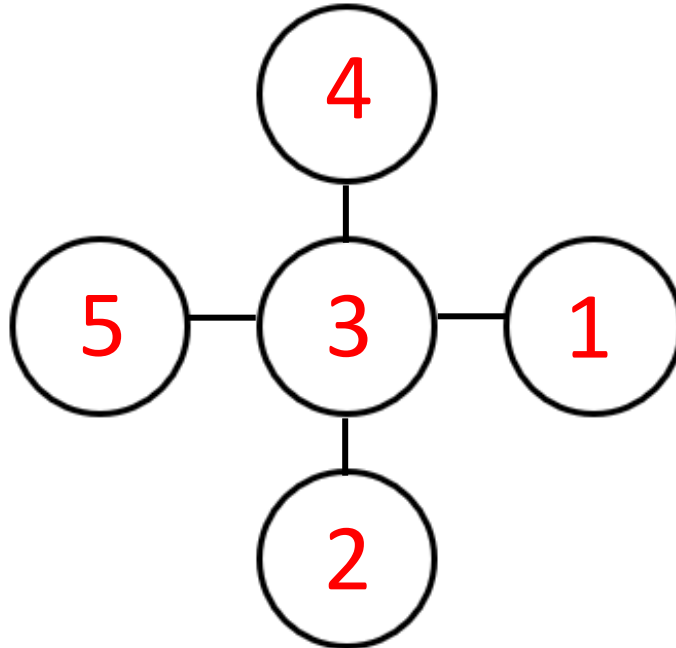
7) 7 =  = 0 tens 7 ones

8) 20 =  = 2 tens 0 ones

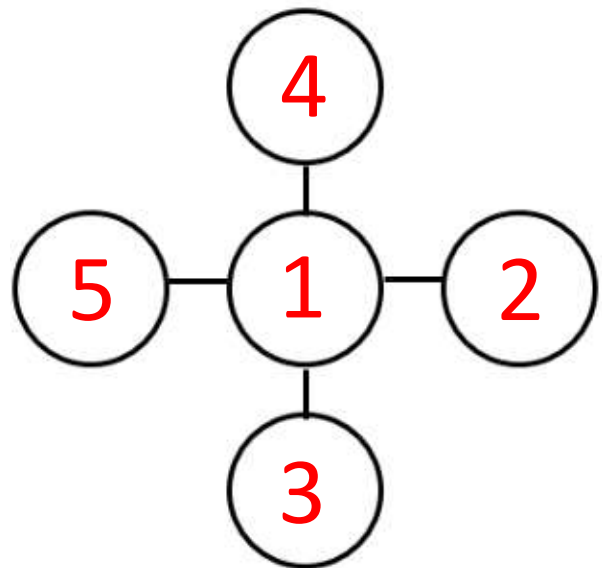
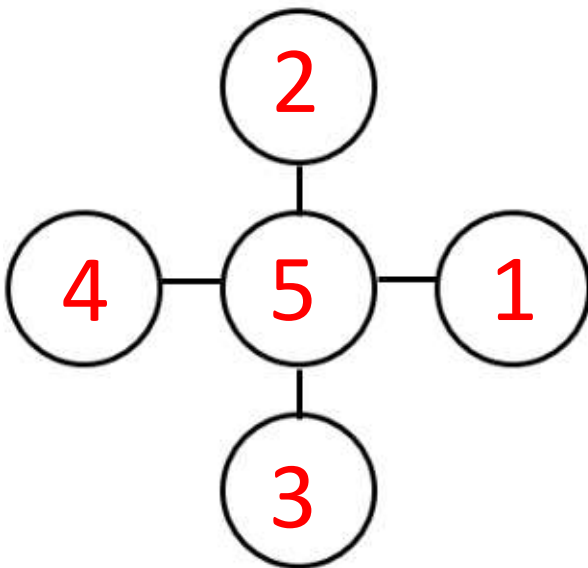
9) 16 =  = 1 ten 6 ones

5 CIRCLES PUZZLE ANSWERS

Write the numbers 1 to 5 in the circles so that each line has the same total.







There are many other solutions which are combinations of these 3 solutions shown.







COUNT AND ORDER SHEET 2 ANSWERS

Count the coins and put the values in order from smallest to biggest.

 <p><u>15¢</u></p>	 <p><u>12¢</u></p>		
 <p><u>11¢</u></p>	 <p><u>7¢</u></p>		
Order the sets of coins from smallest to largest			
<u>7¢</u> smallest	<u>11¢</u>	<u>12¢</u>	<u>15¢</u> largest

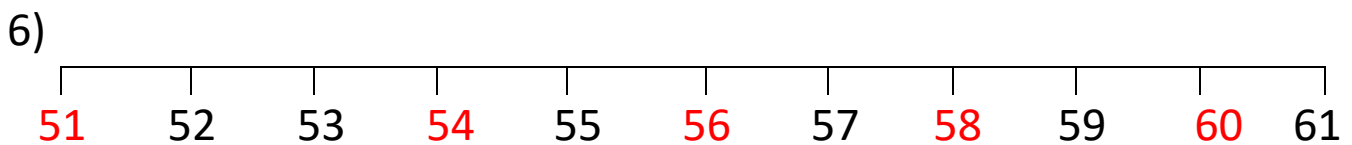
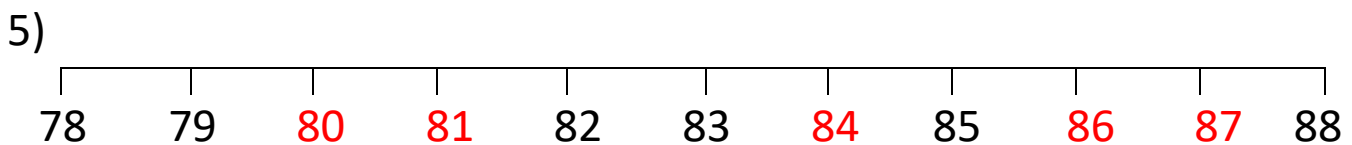
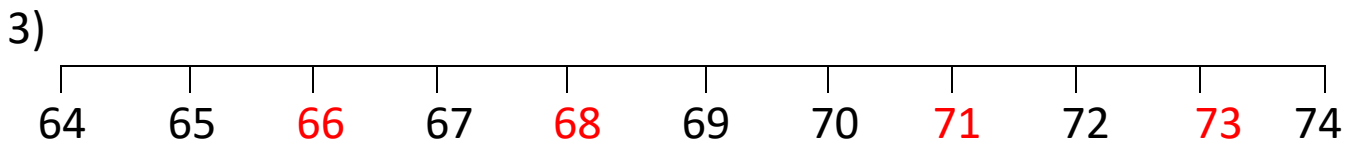
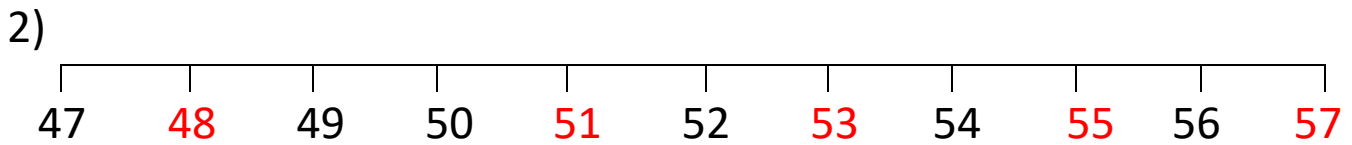
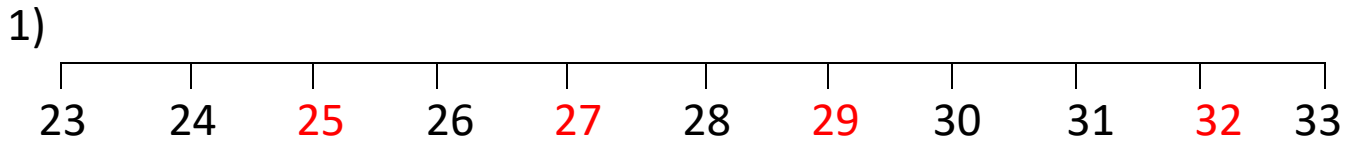
Count the coins and put the values in order from smallest to biggest.

 <p><u>16¢</u></p>	 <p><u>11¢</u></p>		
 <p><u>20¢</u></p>	 <p><u>21¢</u></p>		
Order the sets of coins from smallest to largest			
<u>11¢</u> smallest	<u>16¢</u>	<u>20¢</u>	<u>21¢</u> largest



NUMBER LINES TO 100 SHEET 2 ANSWERS

Write in the missing numbers on the number lines.

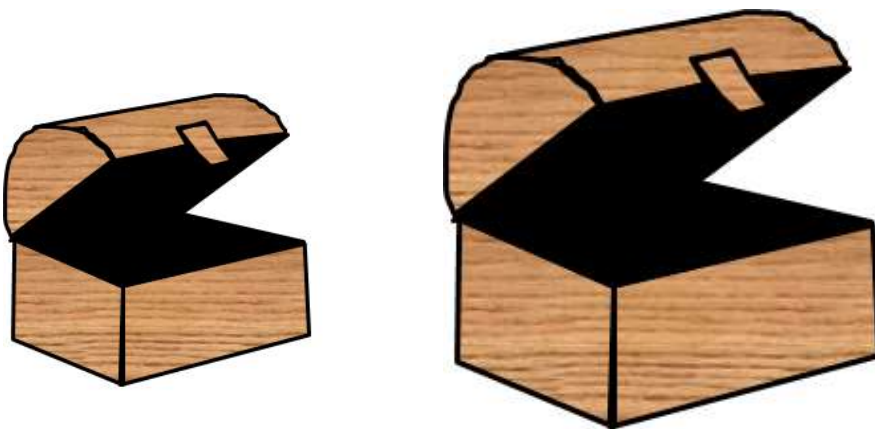


THE TWO CHESTS 1 ANSWERS

There are 5 bags of coins with 1, 2, 3, 4 and 5 gold coins in.

Put the bags of coins into the two chests so that the bigger chest has twice as many coins as the bigger chest.

You cannot open the bags and take the coins out!




There are 3 different ways to do it.

How many can you find?

SMALLER CHEST	LARGER CHEST



TEDDY BEAR DOT-TO-DOT TO 48 COMPLETED



BAR GRAPHS SHEET 1B - PET SURVEY ANSWERS

- 1) Which pet got the most votes? rabbit
- 2) How many votes did the dog get? 7
- 3) How many votes did the fish get? 4
- 4) How many votes did the hamster get? 1
- 5) How many votes did the bird get? 3
- 6) How many votes did the cat get? 5
- 7) Which pet got the least votes? hamster

ADDING WITH TENS SHEET 2 ANSWERS

1) $30 + 20 = \underline{50}$

2) $60 + 10 = \underline{70}$

3) $20 + 30 = \underline{50}$

4) $40 + 30 = \underline{70}$

5) $10 + 50 = \underline{60}$

6) $20 + 20 = \underline{40}$

7) $80 + 10 = \underline{90}$

8) $30 + 40 = \underline{70}$

9) $20 + 50 = \underline{70}$

10) $10 + 60 = \underline{70}$

11) $10 + 90 = \underline{100}$

12) $50 + 30 = \underline{80}$

13) $40 + 40 = \underline{80}$

14) $30 + 10 = \underline{40}$

15) $80 + 20 = \underline{100}$

16) $20 + 60 = \underline{80}$

17) $30 + 50 = \underline{80}$

18) $70 + 30 = \underline{100}$


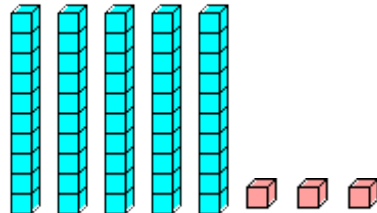
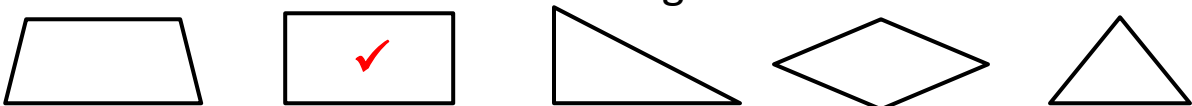
19) $40 + 50 = \underline{90}$

20) $10 + 80 = \underline{90}$

Key question: if you know that $6 + 2 = 8$, then what is $60 + 20$? 80



MENTAL MATH QUIZ 1:5 ANSWERS

1)	12 subtract 5	7
2)	Which month comes before August? April September June March July	July
3)	How much money? 	25¢
4)	Double 6	12
5)	How many? 	53
6)	Add up 3, 5 and 2	10
7)	What number comes after 49?	50
8)	Tick the rectangle. 	
9)	Captain drinks 5 cups of water. Frazer drinks 6 cups. How many cups have they both drunk in total?	11 cups
10)	Flame is 10 years old. Tyger is 6 years old. How much older is Flame?	4 years
11)	A large pack of crisps costs \$2. How much do 3 packs cost?	\$6
12)	I have \$15. I spend \$7. How much do I have left?	\$8