

KINDERGARTEN MATH GRAB PACK 1

ANSWERS



Here are the answers to all the worksheets in Kindergarten Math Pack 1.

CONTENTS – ANSWER SHEETS			
1	Domino Addition 1	7	Number Line 0 to 10
2	Match It Up 1	8	Easter Egg Shape Color in 1
3	Easter Color By Number Rabbit Jumping	9	Fish Addition within 5
4	Easter Dot to Dot 1	10	Subtraction to 10 Sheet 1
5	Count on in ones (up to 15)		
6	Identify Coins 1		

** Please note that the Name and Trace sheet and the Race to 100 Game have no answer sheets.*


Please give us feedback on our pack – both what you liked and what sheets you would like to see more of by leaving a comment on the link below.

<https://www.math-salamanders.com/math-grab-packs.html>

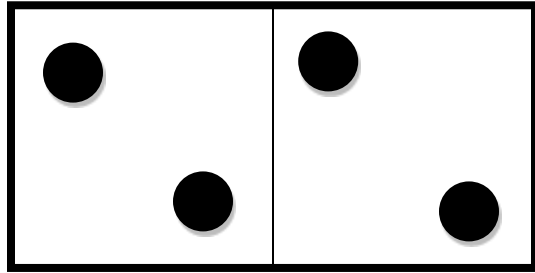


DOMINO ADDITION SHEET 1 ANSWERS

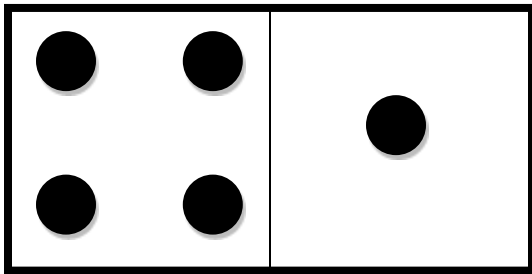
Count the number of dots on each domino and fill in the total.



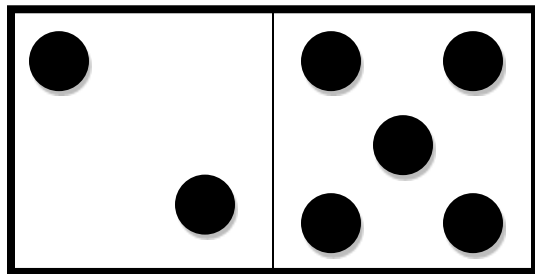
How many spots? 4




How many spots? 4



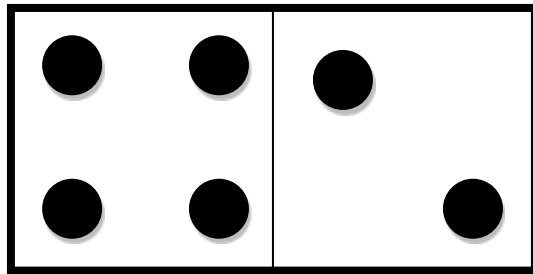
How many spots? 5



How many spots? 7



How many spots? 7




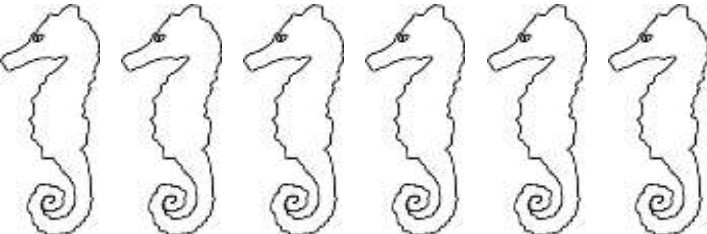




How many spots? 6



MATCH IT UP SHEET 1 ANSWERS

Draw lines to connect the numbers and pictures that go together.

1		
2		
3		
4		
5		
6		

Connections shown in the image:
 - A blue line connects number 1 to the row with 6 seahorses.
 - A red line connects number 2 to the row with 2 spiders.
 - A red line connects number 3 to the row with 5 frogs.
 - A red line connects number 4 to the row with 3 clownfish.
 - A red line connects number 5 to the row with 4 starfish.
 - A red line connects number 6 to the row with 1 snake.

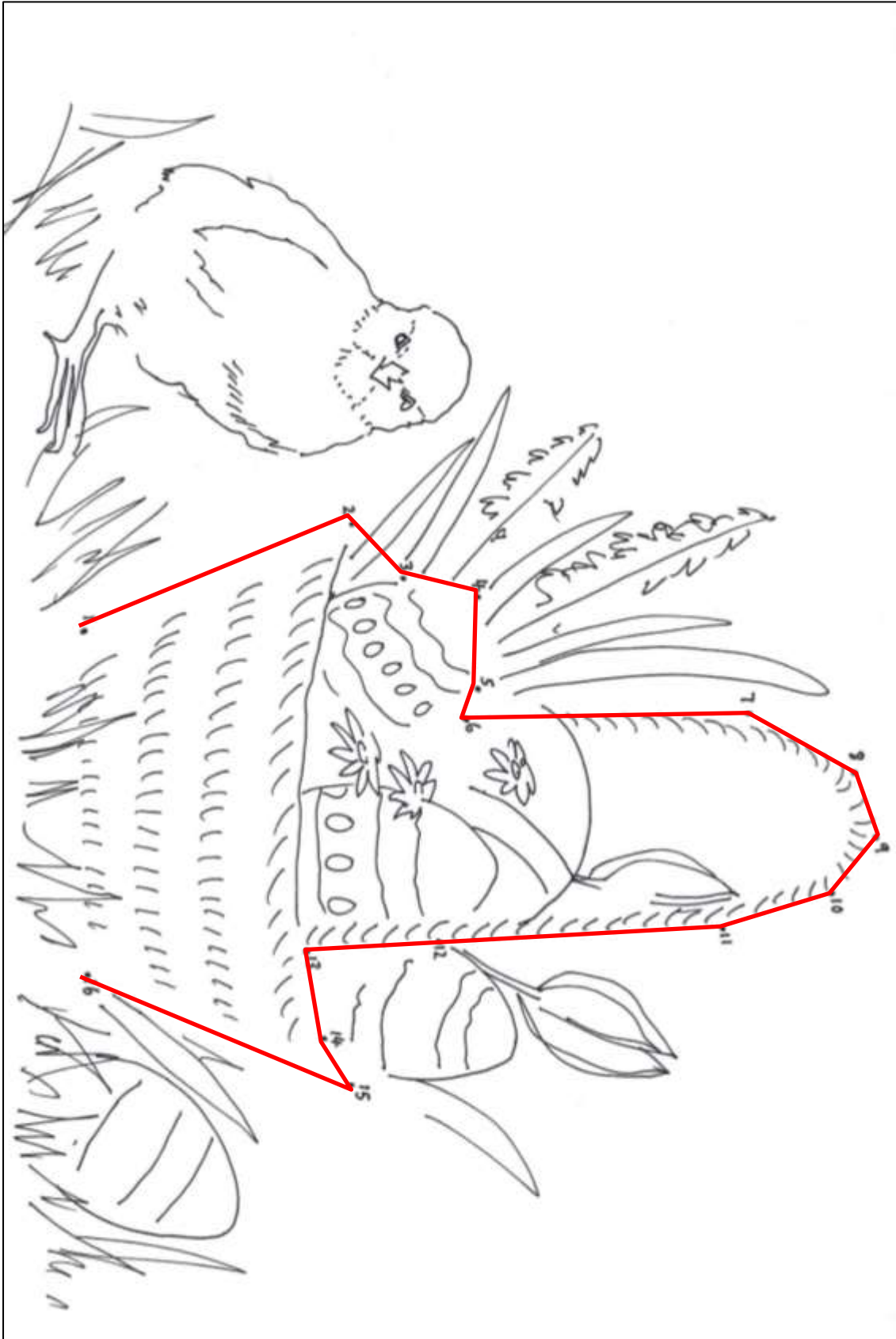


EASTER COLOR BY NUMBER: RABBIT JUMPING COMPLETED

3	3	3	1	1	1	1	1	1	1	1	1	1	1	1	1
3	3	3	1	1	1	1	1	5	5	0	1	1	1	1	1
3	3	1	1	1	1	1	1	5	5	5	0	1	1	1	1
1	1	1	1	1	1	1	1	1	5	5	0	1	1	1	1
1	1	1	1	1	1	1	0	0	0	5	5	0	1	1	1
1	1	1	1	1	0	0	0	0	0	0	0	7	0	1	1
1	0	0	1	0	0	0	0	0	0	0	0	0	0	6	1
1	0	0	0	0	0	0	0	0	0	0	0	5	0	6	1
1	5	0	0	0	0	0	0	0	0	0	0	0	1	1	1
1	1	0	0	0	0	5	5	1	1	5	0	0	0	1	1
1	0	0	0	5	5	1	1	1	1	1	1	0	0	0	1
1	0	0	0	5	1	1	1	2	2	3	3	1	5	0	1
1	0	0	0	1	1	6	4	4	2	2	3	3	1	1	1
1	0	0	1	1	6	6	6	4	4	2	3	3	1	1	1
1	5	5	1	1	4	4	6	6	4	2	2	3	1	1	1
1	1	1	1	3	4	4	4	6	6	4	2	2	1	1	1
1	1	1	1	3	3	4	4	6	6	4	4	2	1	1	1
1	1	1	1	3	3	3	4	4	6	6	4	1	1	1	1
2	2	2	2	2	3	3	3	4	4	6	2	2	2	2	2
2	2	2	2	2	2	3	3	3	2	2	2	2	2	2	2



EASTER DOT-TO-DOT 1 COMPLETED



COUNTING ON IN ONES (UP TO 15)

SHEET 1 ANSWERS

1)

4	5	6	<u>7</u>	8	9	<u>10</u>	11
---	---	---	----------	---	---	-----------	----



2)

5	<u>6</u>	7	8	<u>9</u>	10	<u>11</u>	12
---	----------	---	---	----------	----	-----------	----



3)

7	8	<u>9</u>	10	11	<u>12</u>	13	<u>14</u>
---	---	----------	----	----	-----------	----	-----------



4)

6	<u>7</u>	8	9	<u>10</u>	11	<u>12</u>	13
---	----------	---	---	-----------	----	-----------	----



5)

8	9	10	<u>11</u>	12	<u>13</u>	14	<u>15</u>
---	---	----	-----------	----	-----------	----	-----------







6)

6	7	<u>8</u>	<u>9</u>	10	11	<u>12</u>	13
---	---	----------	----------	----	----	-----------	----



IDENTIFY COINS SHEET 1 ANSWERS

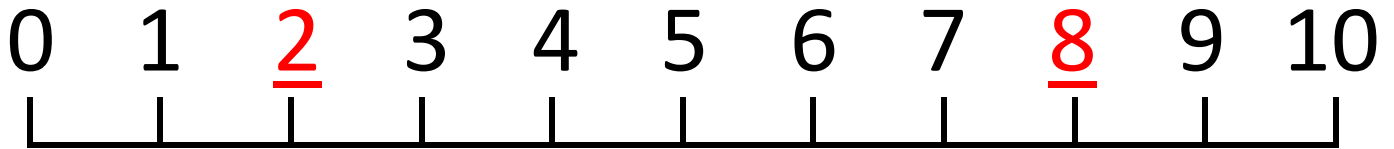
quarters red	dimes blue	nickels green	pennies orange
			
How many? <u>4</u>	How many? <u>3</u>	How many? <u>6</u>	How many? <u>5</u>



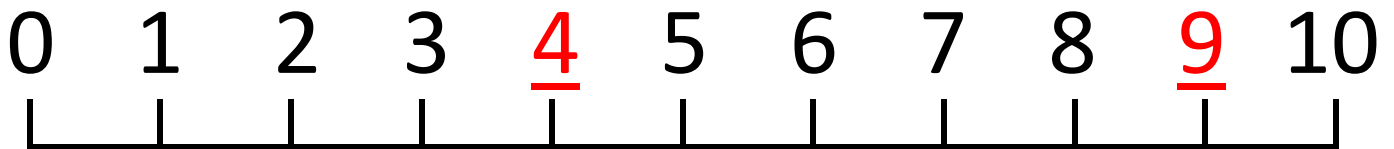
NUMBER LINE 0 TO 10 SHEET 1

Write the missing numbers in the number lines.


A)



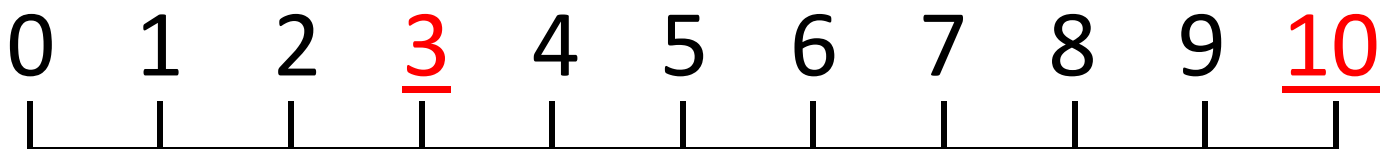
B)



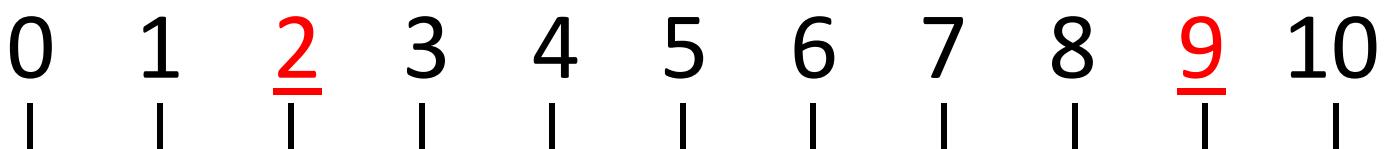
C)





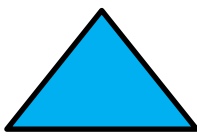


D)




E)



EASTER EGG SHAPE COLOR IN 1

Red	Pink	Blue	Green	Yellow
				



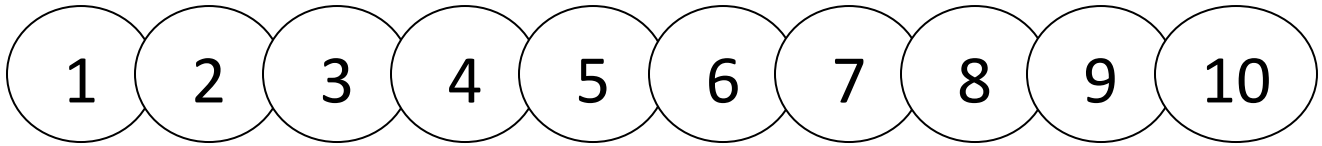
FISH ADDITION WITHIN 5 SHEET 1 ANSWERS

Shade the fish answers: 1 - blue, 2 - yellow, 3 - red, 4 - green, 5 - orange.

15 fish are shown, each with a simple addition problem on its body and a thought bubble containing the answer. The answers are: 2 (yellow), 4 (green), 4 (green), 2 (yellow), 5 (orange), 1 (blue), 4 (green), 2 (yellow), 2 (yellow), 3 (red), 0+2 (yellow), 0+3 (red), 0+1 (blue), 1 (blue), 3 (red), 3+2 (orange), 2+2 (green), 1 (blue).



SUBTRACTION TO 10 SHEET 1 ANSWERS



Take 1 from each of these amounts.

$4 - 1 = 3$	$2 - 1 = \underline{1}$	$5 - 1 = \underline{4}$	$3 - 1 = \underline{2}$

Take 2 away from each of these amounts.

$3 - 2 = \underline{1}$	$4 - 2 = \underline{2}$	$5 - 2 = \underline{3}$	$2 - 2 = \underline{0}$

Take 3 away from each of these amounts.

$5 - 3 = \underline{2}$	$6 - 3 = \underline{3}$	$3 - 3 = \underline{0}$	$4 - 3 = \underline{1}$

