

MATH SALAMANDERS KINDERGARTEN

MATH GRAB PACK 6 ANSWERS



Here are answers to all the worksheets in our
Kindergarten Math Grab Pack 6.

CONTENTS			
1	One More Sheet 5	7	Count and Color to 20 Sheet 3
2	Animal Subtraction to 10 Sheet 2B	8	Spot the Pattern 6
3	Addition Sentences to 10 Sheet 4		
4	Salamander Balloon Dot-to-dot		
5	Who Has Least Sheet 2		
6	Number Bonds to 10 Sheet 5		


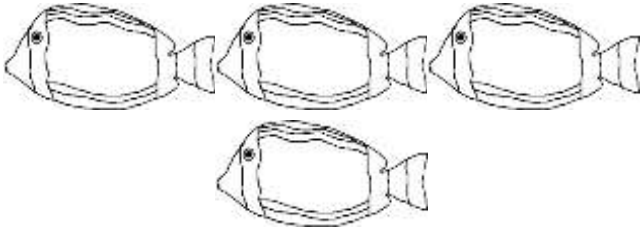

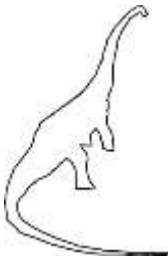

Please give us feedback on our pack – both what you liked and what sheets you would like to see more of by leaving a comment on the link below.

<https://www.math-salamanders.com/math-grab-packs.html>



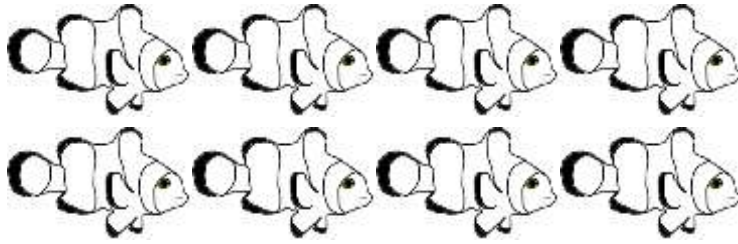
ONE MORE SHEET 5 ANSWERS

Circle the number that is **one more** than the number of objects.

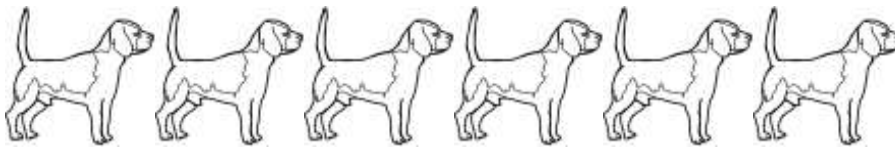
1)		2	3	4
2)		3	5	6
3)		5	6	7
4)		2	3	1
5)		4	6	8




ANIMAL SUBTRACTION TO 10 SHEET 2B ANSWERS



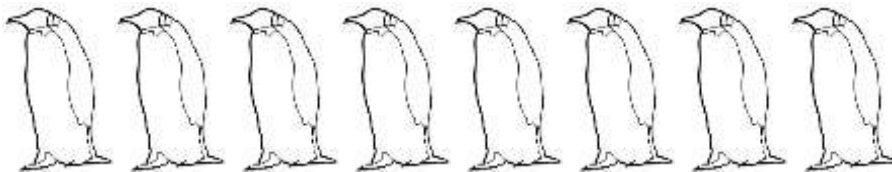
$$\begin{array}{r} 8 \\ - 2 \\ \hline 6 \end{array}$$




$$\begin{array}{r} 6 \\ - 5 \\ \hline 1 \end{array}$$



$$\begin{array}{r} 7 \\ - 4 \\ \hline 3 \end{array}$$



$$\begin{array}{r} 8 \\ - 3 \\ \hline 5 \end{array}$$



$$\begin{array}{r} 10 \\ - 2 \\ \hline 8 \end{array}$$



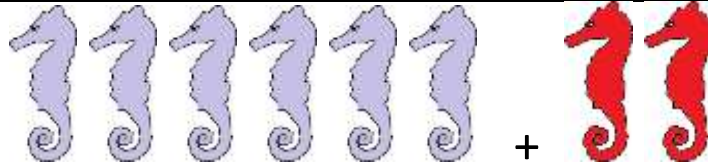
ADDITION SENTENCES TO 10 SHEET 4 ANSWERS

1)



$$4 + 3 = 7$$

2)



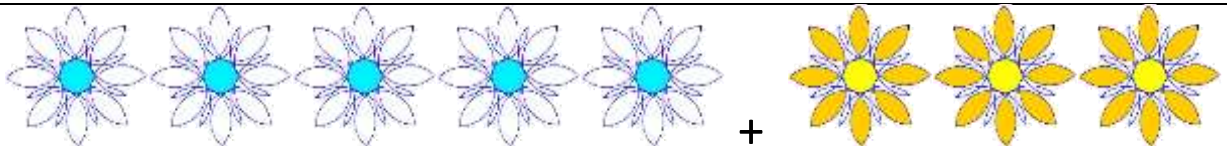
$$\underline{6} + \underline{2} = \underline{8}$$

3)




$$\underline{2} + \underline{5} = \underline{7}$$

4)



$$\underline{5} + \underline{3} = \underline{8}$$

5)



$$\underline{4} + \underline{5} = \underline{9}$$

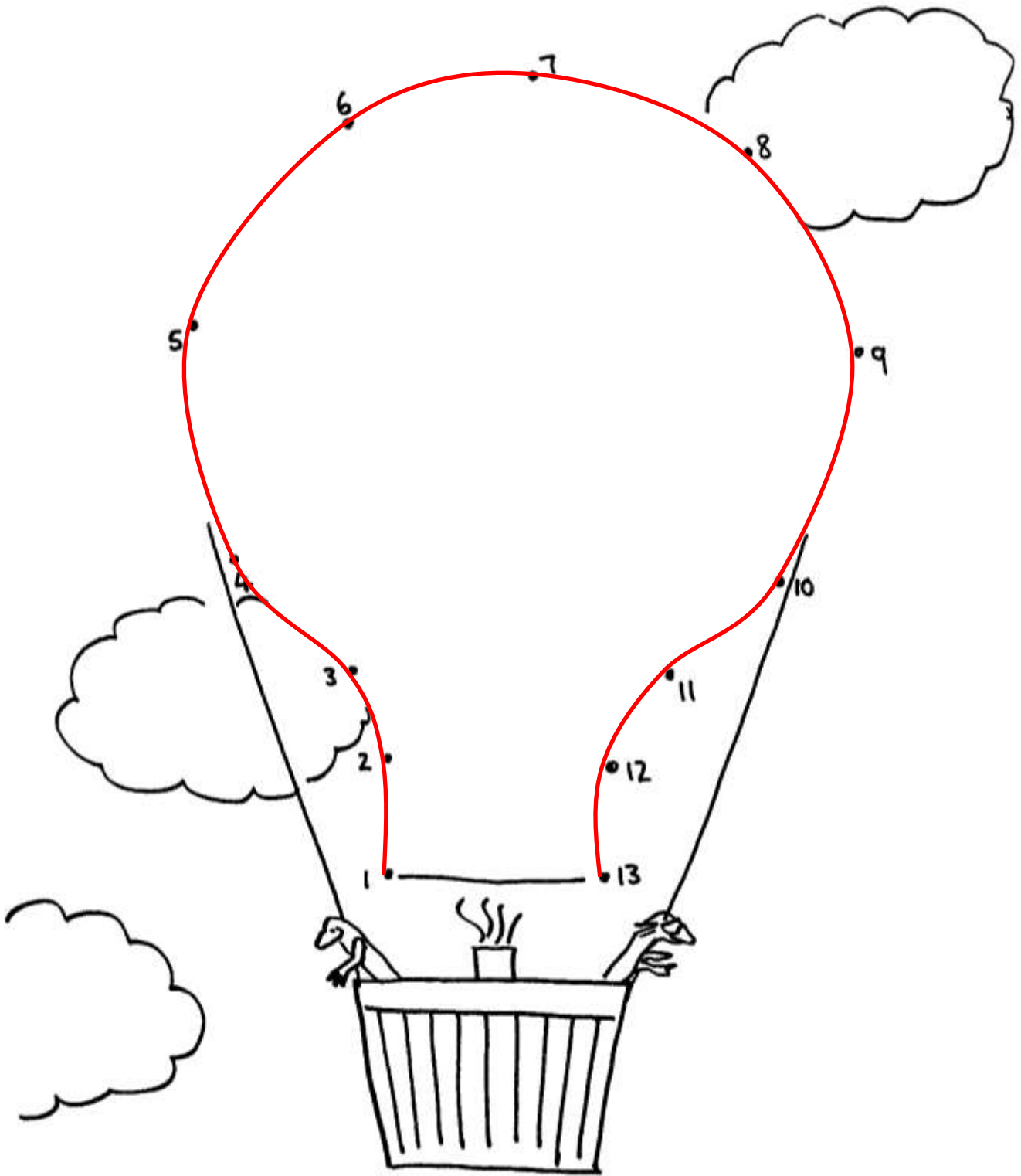
6)



$$\underline{1} + \underline{7} = \underline{8}$$


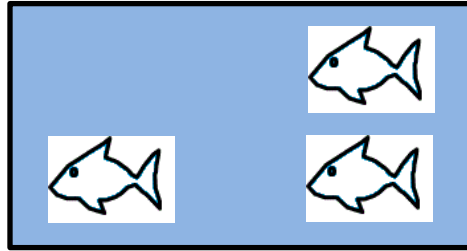



SALAMANDER BALLOON DOT-TO-DOT TO 13 COMPLETED



WHO HAS LEAST? SHEET 2 ANSWERS

1) Shade the tank with the **least** fish blue.



2) Circle the **smallest** number.

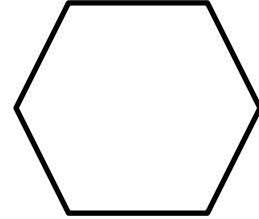

3

5





2

4

3) Shade the shape with the **least** sides yellow.



4) Shade the dice with the **smallest** number red.



NUMBER BONDS TO 10 SHEET 5 ANSWERS

0	1	2	3	4	5	6	7	8	9	10
---	---	---	---	---	---	---	---	---	---	----

Fill in the missing numbers to make 10.

$$7 + \underline{3} = 10$$

$$5 + \underline{5} = 10$$

$$8 + \underline{2} = 10$$

$$4 + \underline{6} = 10$$

$$9 + \underline{1} = 10$$

$$10 + \underline{0} = 10$$

Fill in the missing facts

10 is 1 more than 9

10 is 2 more than 8

10 is 3 more than 7

10 is 4 more than 6

10 is 5 more than 5

10 is 6 more than 4

10 is 7 more than 3

10 is 8 more than 2

10 is 9 more than 1

10 is 10 more than 0

Join up the pairs of numbers that add up to 10.


5 — 5

8 — 2

3 — 7


9 — 1

4 — 6



COUNT AND COLOR TO 20 SHEET 3 ANSWERS

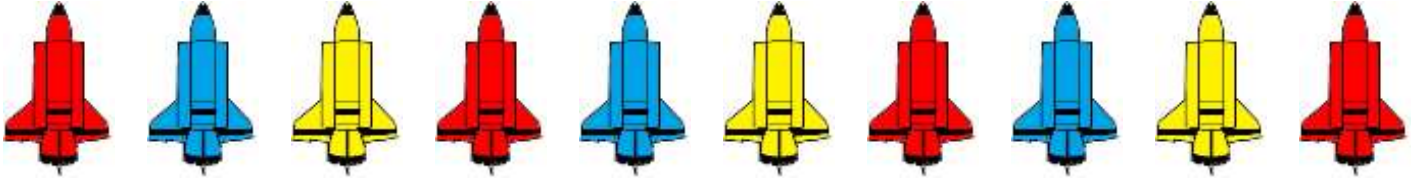
	Tens frame	How many?
1)		13
2)		8
3)		14
4)		11
5)		16
6)		20
7)		15




SPOT THE PATTERN 6 ANSWERS

Spot the pattern and then fill in the missing patterns.

1) Shade the last 3 rockets.




2) Complete the last 2 face patterns.



3) Complete the last 3 buckets in the pattern.



4) Complete the last 2 dice patterns.



5) Write the missing numbers in this pattern.

1	2	3	4	5	6	7	8	9	10	11	12
---	---	---	---	---	---	---	---	---	----	----	----

6) Fill in the missing numbers in this pattern.

4	5	6	7	8	9	10	11	12	13	14	15
---	---	---	---	---	---	----	----	----	----	----	----