


MATH SALAMANDERS YEAR 1 MATHS GRAB PACK 2

This pack is a selection of 11 Math sheets and one game designed especially for Year 1 children.



In the pack is a range of number sheets, colouring pages, and puzzles.

There is also an answer pack which you can download separately.

CONTENTS			
1	Addition Sentences to 10 Sheet 1	7	Greater, Less and Equal Sheet 4
2	Count and Colour to 25 Sheet 1	8	Colour by number – Two Chicks
3	Easter Colour by Number 5 to 10	9	Identify 2D and 3D Shapes Sheet 1
4	Add and Subtract to 10 Sheet 2	10	Counting Money 10p and 1p Sheet 1
5	Easter Egg Shape Colour in Sheet 2	11	Numbers to 10 Sheet 2
6	Count back in ones up to 20	12	Race to the Moon Addition within 10

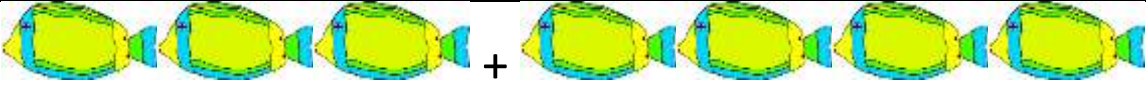
Please give us feedback on our pack – both what you liked and what sheets you would like to see more of by leaving a comment on the link below.


<https://www.math-salamanders.com/maths-grab-packs.html>





ADDITION SENTENCES TO 10 SHEET 1


Circle the correct sum that matches the picture.

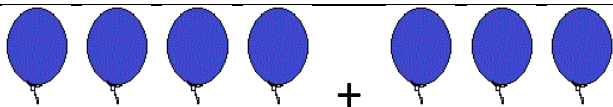
1)				
	2 + 4	3 + 4	4 + 4	3 + 5

2)				
	4 + 3	5 + 3	4 + 4	5 + 4

3)				
	2 + 5	2 + 4	2 + 6	2 + 3



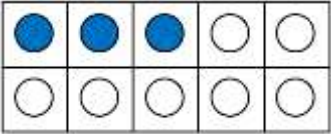
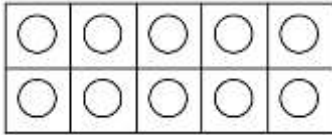
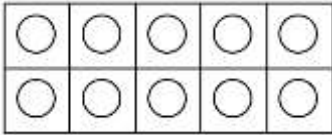
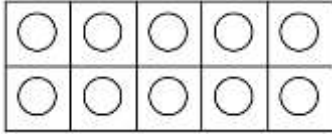
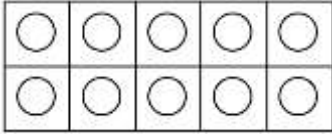
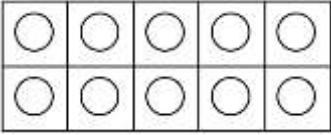
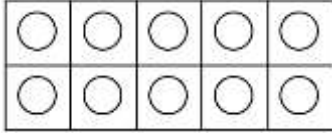
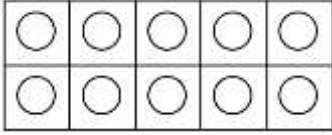
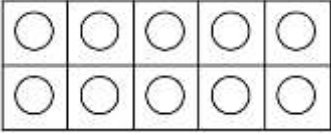
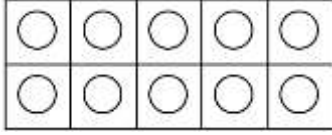
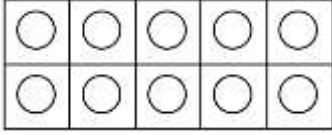
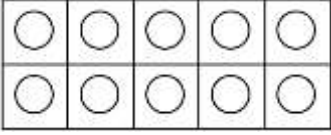
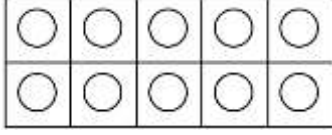
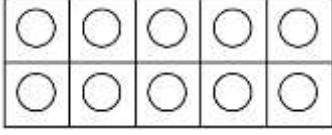

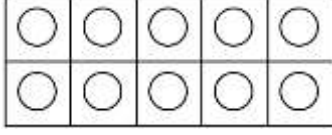
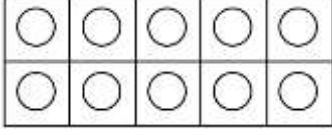
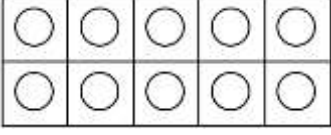
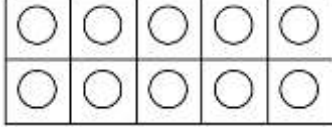
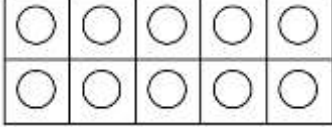
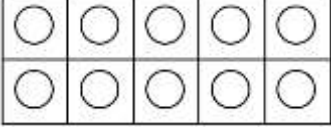
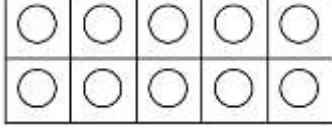
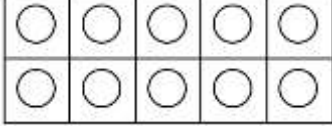
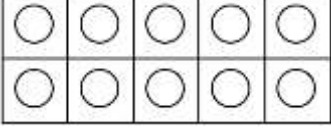
4)				
	2 + 3	3 + 3	3 + 4	4 + 2


5)				
	3 + 5	4 + 4	5 + 5	4 + 5

6)				
	3 + 2	2 + 3	4 + 2	4 + 1



COUNT AND COLOUR TO 25 SHEET 1

	Tens frame			How many?
1)				23
2)				21
3)				18
4)				25
5)				22
6)				16
7)				24
8)				17
9)				20



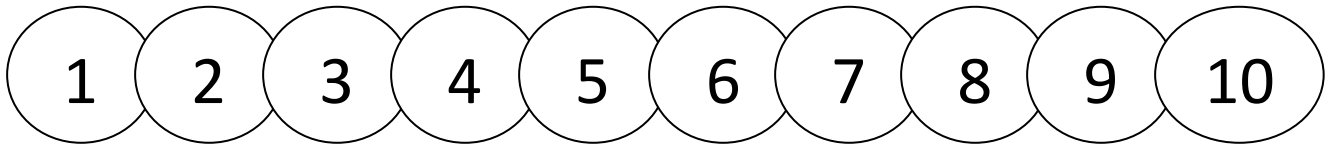
EASTER COLOUR BY NUMBER: CHICK 5 TO 10

5	5	5	5	5	9	9	8	9	9	5	5	5	5	5	5
5	5	5	5	10	9	8	8	8	8	9	9	5	5	5	5
5	5	5	9	9	8	8	8	8	8	8	5	5	5	5	5
5	5	5	5	8	8	8	8	8	8	8	8	5	5	5	5
5	5	5	5	8	8	8	8	8	8	8	8	5	5	5	5
5	5	5	5	8	5	8	8	8	8	5	8	5	5	5	5
5	5	9	5	8	8	8	7	7	8	8	8	5	9	10	5
5	9	10	8	8	8	7	7	7	7	8	8	8	8	5	5
5	8	8	8	8	8	8	7	7	8	8	8	8	10	8	9
8	8	8	9	10	8	8	8	8	8	8	10	9	9	8	8
5	8	6	6	9	10	8	8	9	8	9	9	6	6	6	5
5	9	9	9	6	6	9	8	9	9	6	6	9	9	10	5
5	7	7	7	9	9	6	6	6	9	9	9	7	7	7	5
5	10	9	7	7	7	9	9	9	7	7	7	9	7	9	5
5	10	9	9	7	9	7	7	7	9	7	9	9	9	10	5
5	5	6	6	6	9	9	7	9	9	9	6	6	6	5	5
5	5	9	9	6	6	6	9	9	6	6	6	9	5	5	5
9	5	5	10	9	9	9	6	6	9	9	9	10	5	5	10
9	10	5	5	10	10	9	9	9	10	10	10	5	5	9	9
9	9	9	5	5	9	10	10	10	10	9	5	5	9	10	9

KEY		
5 black	6 green	7 red
8 yellow	9 blue	10 white


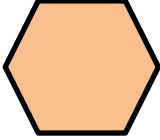






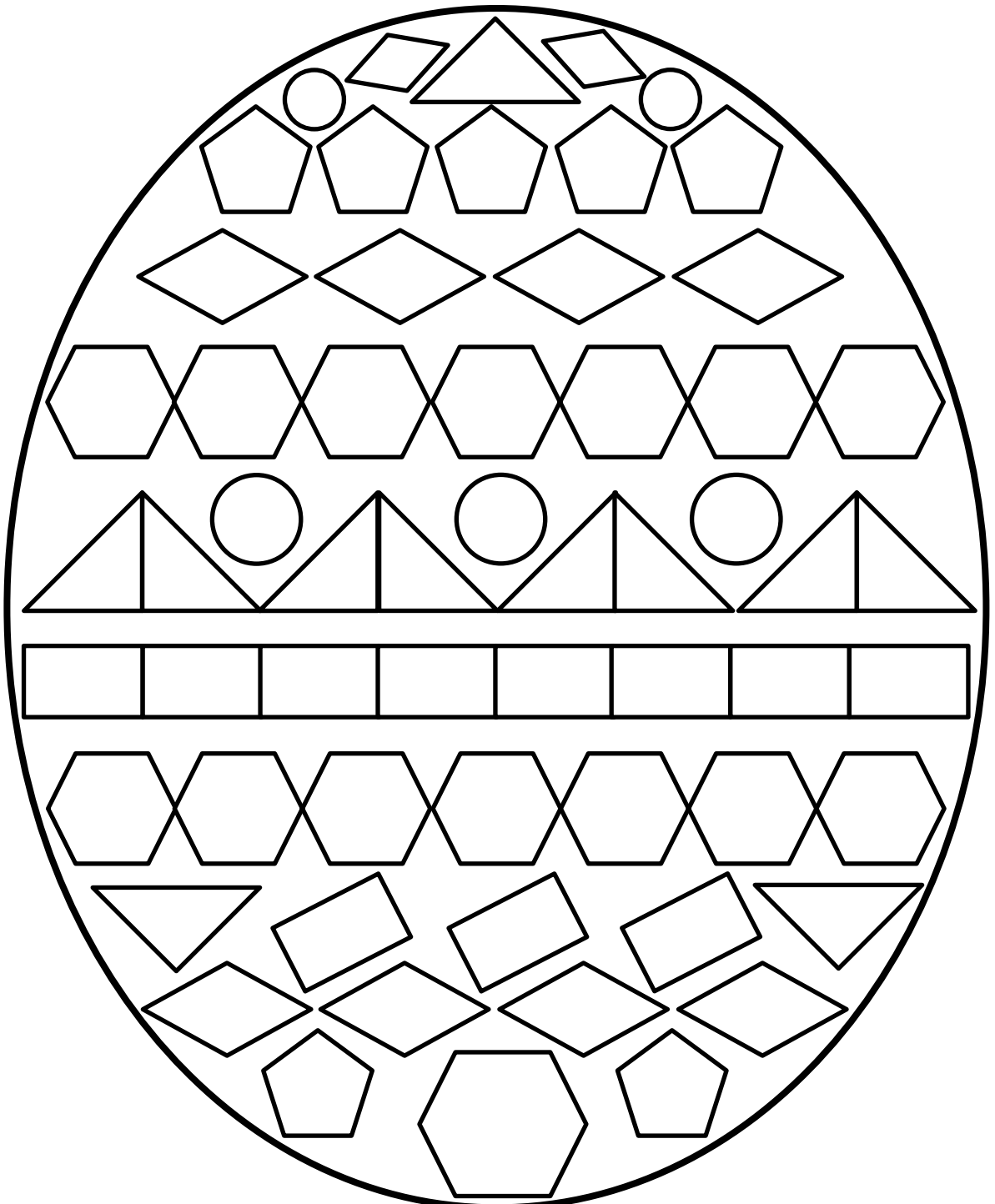
ADD AND SUBTRACT TO 10 SHEET 2



<p>1) $4 + 4 =$</p> <p>● ● ● ● ● ● ● ●</p>	<p>7) $7 - 3 =$</p> <p>● ● ● ● ● ● ●</p>
<p>2) $6 + 2 =$</p> <p>● ● ● ● ● ● ● ●</p>	<p>8) $10 - 2 =$</p> <p>● ● ● ● ● ● ● ● ● ●</p>
<p>3) $2 + 5 =$</p> <p>● ● ● ● ● ● ●</p>	<p>9) $8 - 4 =$</p> <p>● ● ● ● ● ● ● ●</p>
<p>4) $9 + 1 =$</p> <p>● ● ● ● ● ● ● ● ● ●</p>	<p>10) $6 - 5 =$</p> <p>● ● ● ● ● ●</p>
<p>5) $3 + 6 =$</p> <p>● ● ● ● ● ● ● ● ●</p>	<p>11) $9 - 7 =$</p> <p>● ● ● ● ● ● ● ● ●</p>
<p>6) $8 + 2 =$</p> <p>● ● ● ● ● ● ● ● ● ●</p>	<p>12) $10 - 5 =$</p> <p>● ● ● ● ● ● ● ● ● ●</p>

EASTER EGG SHAPE COLOR IN 2

Red	Pink	Blue	Green	Yellow	Purple
					



COUNTING BACK IN ONES (UP TO 20) SHEET 1

20	19	18	17	16	15	14	13	12	11	10	9	8	7	6	5	4	3	2	1	0
----	----	----	----	----	----	----	----	----	----	----	---	---	---	---	---	---	---	---	---	---

Help Newton to fill in the missing numbers by counting **back** in ones.



1)

16	15	14		12	11		9
----	----	----	--	----	----	--	---

2)

18		16	15		13	12	
----	--	----	----	--	----	----	--

3)

20	19		17	16		14	
----	----	--	----	----	--	----	--

4)

19	18	17		15	14		12
----	----	----	--	----	----	--	----

5)

17	16		14		12		10
----	----	--	----	--	----	--	----

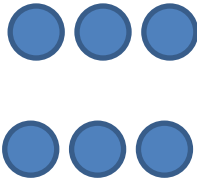

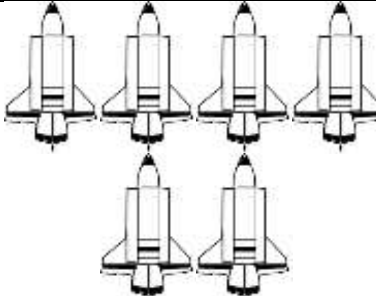
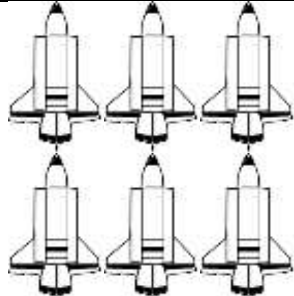






6)

15		13	12		10		8
----	--	----	----	--	----	--	---




GREATER, LESS AND EQUAL SHEET 4

Circle the correct choice.

1)		<p>is greater than ></p> <p>is equal to =</p> <p>is less than <</p>	
2)		<p>is greater than ></p> <p>is equal to =</p> <p>is less than <</p>	
3)		<p>is greater than ></p> <p>is equal to =</p> <p>is less than <</p>	
4)		<p>is greater than ></p> <p>is equal to =</p> <p>is less than <</p>	
5)	<p style="text-align: center; font-size: 2em;">8</p>	<p>is greater than ></p> <p>is equal to =</p> <p>is less than <</p>	<p style="text-align: center; font-size: 2em;">9</p>
6)		<p>is greater than ></p> <p>is equal to =</p> <p>is less than <</p>	



EASTER COLOUR BY NUMBER TWO CHICKS



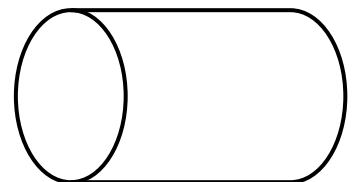


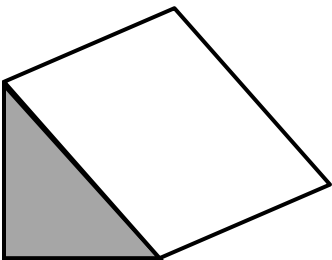
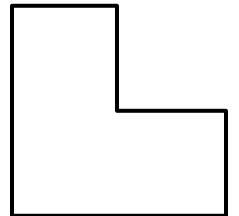
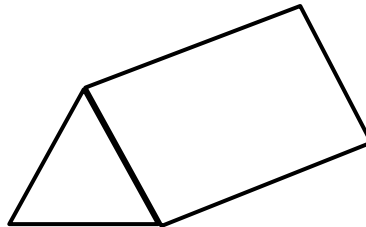
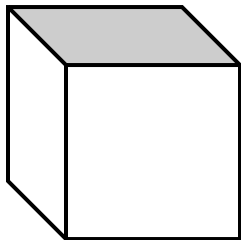
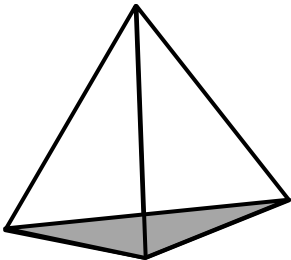


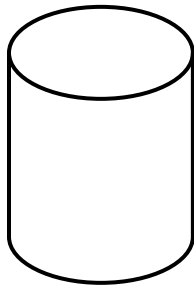
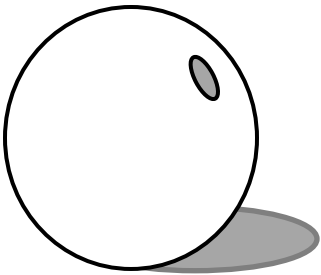
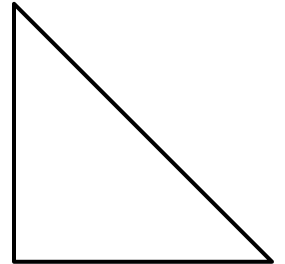
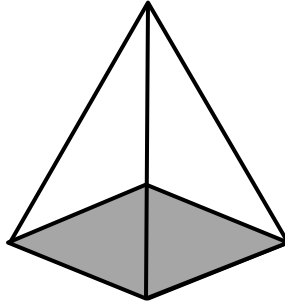
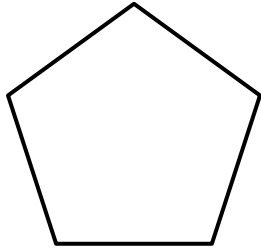
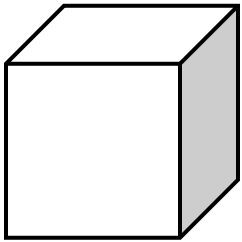
KEY

1 pale yellow	2 orange	3 light brown	4 light orange
5 brown	6 light green	7 green	8 dark green





























IDENTIFY 2D & 3D SHAPES SHEET 1

Shade in the 2D shapes yellow and the 3D shapes green.



COUNTING MONEY: 10p AND 1p COINS SHEET 1

Count the 10p and 1p coins and write down the totals.

		_____ p				
				_____ p		
				_____ p		
				_____ p		
						_____ p
						_____ p

Fill in the correct amounts

$10p + 1p + 1p = \underline{\quad} p$

$10p + 10p + 1p = \underline{\quad} p$


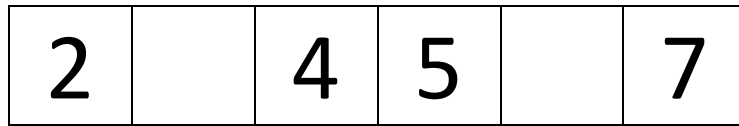
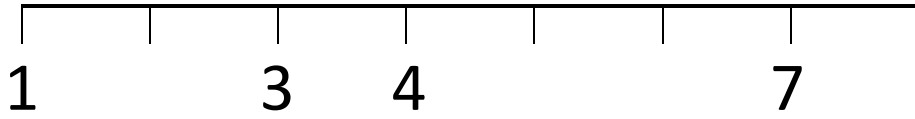
$10p + 10p + 1p + 1p + 1p = \underline{\quad} p$

$10p + 10p + 10p + 1p = \underline{\quad} p$

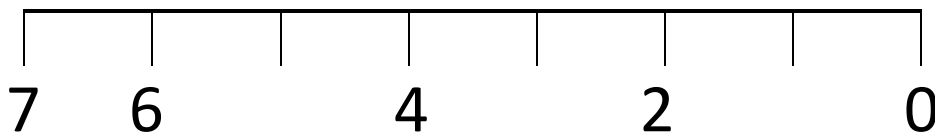
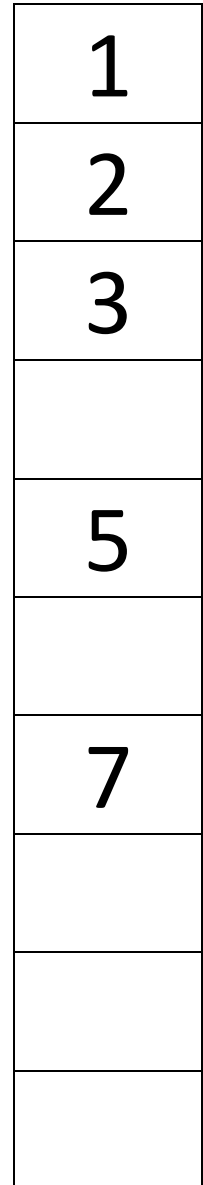
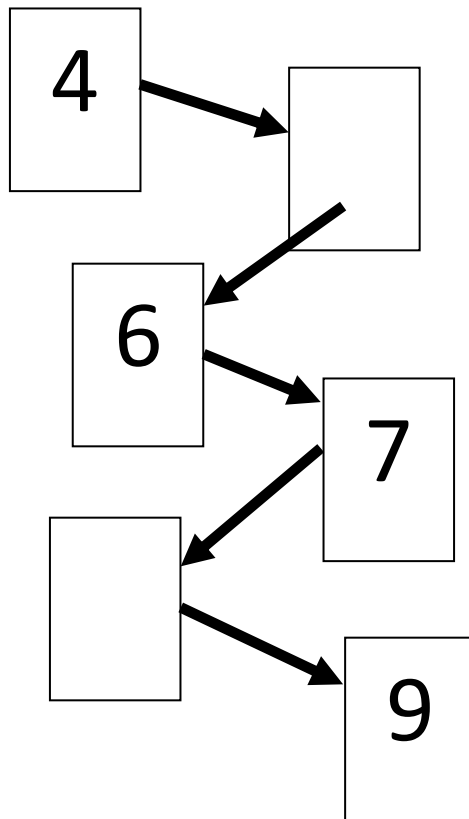


NUMBERS TO 10 SHEET 2

Fill in the missing numbers in these patterns.



How many spots? _____



RACE TO THE MOON

ADDING TO 10

Age range: Kindergarten +

Number of players: 2 or 3

Learning: Add with numbers within 10

You will need

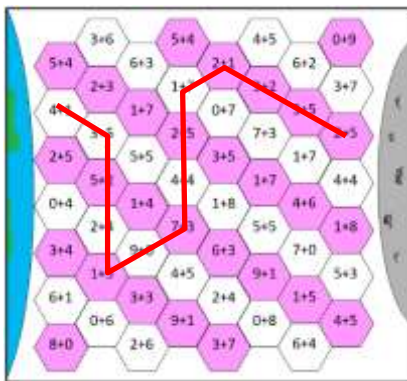
- 20 counters in different colors (one color per player)

Instructions

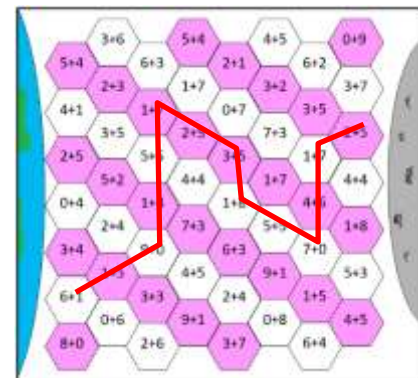
- Choose an addition you want to place a counter on. You can only place a counter on a calculation which does not already have a counter on.
- Work out the answer in your head. You can use the number line to help you.
- Say the calculation and the answer.
- Your partner will check in their head.
- If you are right, you place a counter. Then it is your partner's turn. If you are wrong, you don't get to place a counter.
- The winner is the first person to complete an unbroken path of counters from the Earth to the Moon (path can go across, down, diagonally).

Variations (if you want to change the rules)

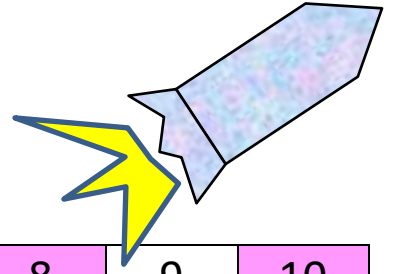
- If you get an answer wrong, your partner can remove one of your counters from the board.



Examples of winning paths



RACE TO THE MOON



ADDING TO 10

0	1	2	3	4	5	6	7	8	9	10
---	---	---	---	---	---	---	---	---	---	----

Who will be first to get from Earth to the Moon?



Free Math Sheets, Math Games and Math Help

MATH-SALAMANDERS.COM