


# MATH SALAMANDERS YEAR 1

## MATHS GRAB PACK 2 ANSWERS



Here are the answers to all the sheets in our Year 1 Maths Grab Pack 2.

CONTENTS – ANSWER SHEETS			
1	Addition Sentences to 10 Sheet 1	7	Greater, Less and Equal Sheet 4
2	Count and Colour to 25 Sheet 1	8	Colour by number – Two Chicks
3	Easter Colour by Number 5 to 10	9	Identify 2D and 3D Shapes Sheet 1
4	Add and Subtract to 10 Sheet 2	10	Counting Money 10p and 1p Sheet 1
5	Easter Egg Shape Colour in Sheet 2	11	Numbers to 10 Sheet 2
6	Count back in ones up to 20		


Please give us feedback on our pack – both what you liked and what sheets you would like to see more of by leaving a comment on the link below.


<https://www.math-salamanders.com/maths-grab-packs.html>





# ADDITION SENTENCES TO 10 SHEET 1 ANSWERS


Circle the correct sum that matches the picture.


1)			
	$2 + 4$	$3 + 4$	$4 + 4$

2)			
	$4 + 3$	$5 + 3$	$4 + 4$

3)			
	$2 + 5$	$2 + 4$	$2 + 6$

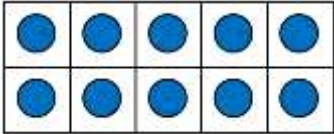
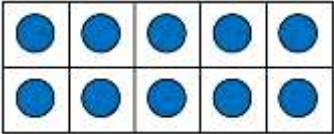
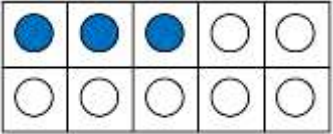

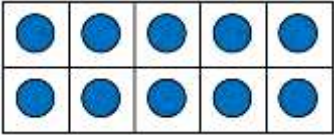
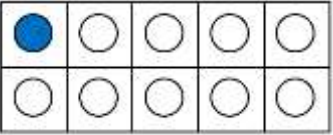

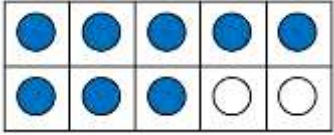
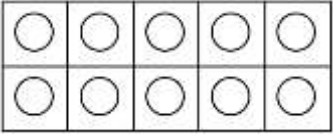


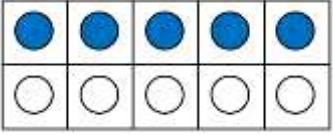


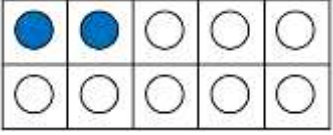

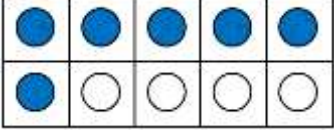

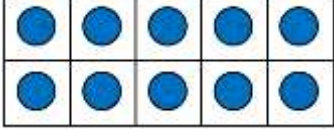

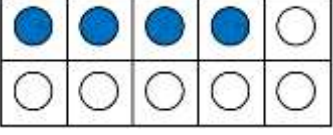

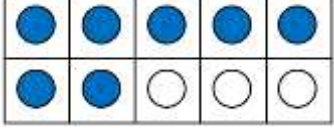
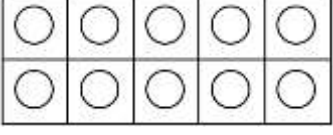
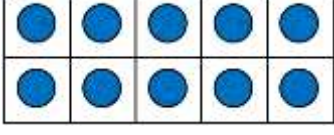
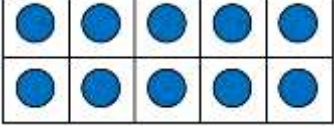
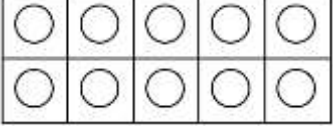
4)			
	$2 + 3$	$3 + 3$	$4 + 2$


5)			
	$3 + 5$	$4 + 4$	$4 + 5$

6)			
	$4 + 3$	$2 + 3$	$4 + 2$



# COUNT AND COLOUR TO 25 SHEET 1 ANSWERS

	Tens frame			How many?
1)				23
2)				21
3)				18
4)				25
5)				22
6)				16
7)				24
8)				17
9)				20

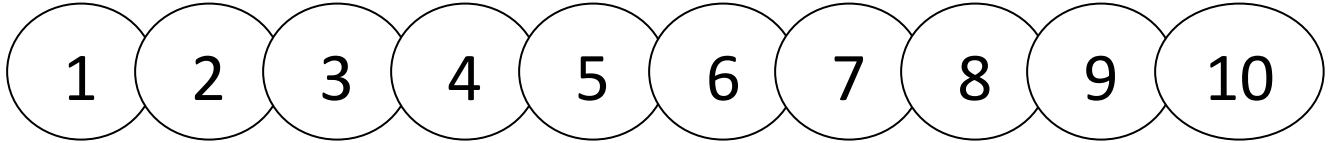


## EASTER COLOUR BY NUMBER: CHICK COMPLETED

5	5	5	5	5	9	9	8	9	9	5	5	5	5	5	5
5	5	5	5	10	9	8	8	8	8	9	9	5	5	5	5
5	5	5	9	9	8	8	8	8	8	8	5	5	5	5	5
5	5	5	5	8	8	8	8	8	8	8	8	5	5	5	5
5	5	5	5	8	8	8	8	8	8	8	8	5	5	5	5
5	5	5	5	8	5	8	8	8	8	5	8	5	5	5	5
5	5	9	5	8	8	8	7	7	8	8	8	5	9	10	5
5	9	10	8	8	8	7	7	7	7	8	8	8	8	5	5
5	8	8	8	8	8	8	7	7	8	8	8	8	10	8	9
8	8	8	9	10	8	8	8	8	8	8	10	9	9	8	8
5	8	6	6	9	10	8	8	9	8	9	9	6	6	6	5
5	9	9	9	6	6	9	8	9	9	6	6	9	9	10	5
5	7	7	7	9	9	6	6	6	9	9	9	7	7	7	5
5	10	9	7	7	7	9	9	9	7	7	7	9	7	9	5
5	10	9	9	7	9	7	7	7	9	7	9	9	9	10	5
5	5	6	6	6	9	9	7	9	9	9	6	6	6	5	5
5	5	9	9	6	6	6	9	9	6	6	6	9	5	5	5
9	5	5	10	9	9	9	6	6	9	9	9	10	5	5	10
9	10	5	5	10	10	9	9	9	10	10	10	5	5	9	9
9	9	9	5	5	9	10	10	10	10	9	5	5	9	10	9



## ADD AND SUBTRACT TO 10 SHEET 2 ANSWERS


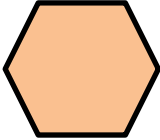
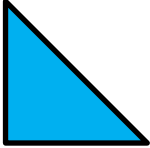





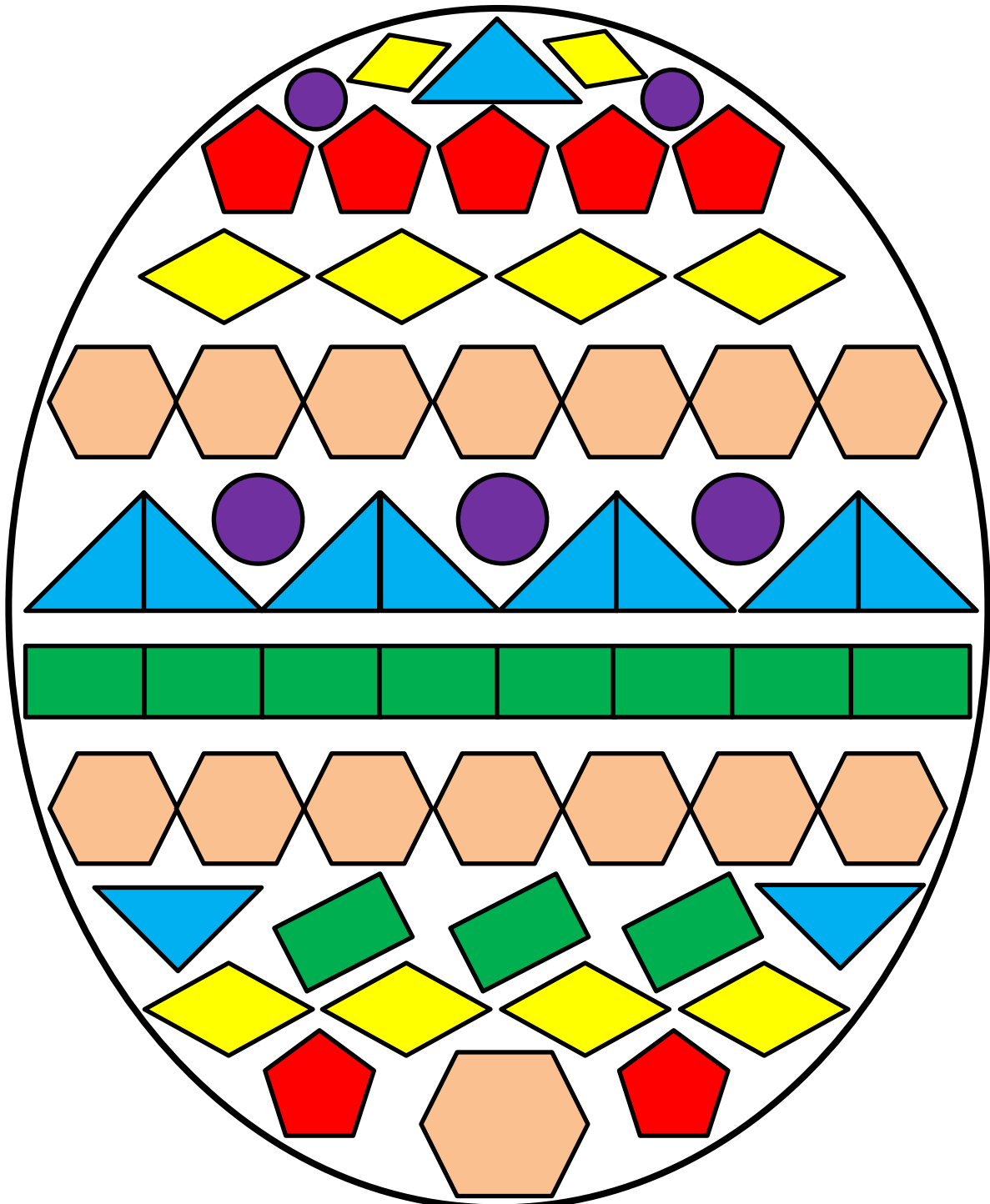
<p>1) <math>4 + 4 = \underline{8}</math></p> <p>● ● ● ●      ● ● ● ●</p>	<p>7) <math>7 - 3 = \underline{4}</math></p> <p>● ● ● ● <del>● ● ●</del></p>
<p>2) <math>6 + 2 = \underline{8}</math></p> <p>● ● ● ● ● ●      ● ●</p>	<p>8) <math>10 - 2 = \underline{8}</math></p> <p>● ● ● ● ● ● ● ● <del>● ●</del></p>
<p>3) <math>2 + 5 = \underline{7}</math></p> <p>● ●      ● ● ● ● ●</p>	<p>9) <math>8 - 4 = \underline{4}</math></p> <p>● ● ● ● ● ● ● ●</p>
<p>4) <math>9 + 1 = \underline{10}</math></p> <p>● ● ● ● ● ● ● ● ● ●</p>	<p>10) <math>6 - 5 = \underline{1}</math></p> <p>● ● ● ● ● ●</p>
<p>5) <math>3 + 6 = \underline{9}</math></p> <p>● ● ●      ● ● ● ● ● ●</p>	<p>11) <math>9 - 7 = \underline{2}</math></p> <p>● ● ● ● ● ● ● ● ●</p>
<p>6) <math>8 + 2 = \underline{10}</math></p> <p>● ● ● ● ● ● ● ●      ● ●</p>	<p>12) <math>10 - 5 = \underline{5}</math></p> <p>● ● ● ● ● ● ● ● ● ●</p>

Remember to count carefully!



# EASTER EGG SHAPE COLOUR IN 2 COMPLETED

Red	Pink	Blue	Green	Yellow	Purple
					



## COUNTING BACK IN ONES (UP TO 20)

## SHEET 1 ANSWERS

1)

16	15	14	<u>13</u>	12	11	<u>10</u>	9
----	----	----	-----------	----	----	-----------	---

2)

18	<u>17</u>	16	15	<u>14</u>	13	12	<u>11</u>
----	-----------	----	----	-----------	----	----	-----------



3)

20	19	<u>18</u>	17	16	<u>15</u>	14	<u>13</u>
----	----	-----------	----	----	-----------	----	-----------



4)

19	18	17	<u>16</u>	15	14	<u>13</u>	12
----	----	----	-----------	----	----	-----------	----



5)

17	16	<u>15</u>	14	<u>13</u>	12	<u>11</u>	10
----	----	-----------	----	-----------	----	-----------	----



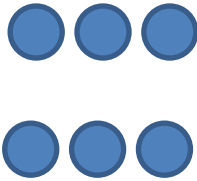

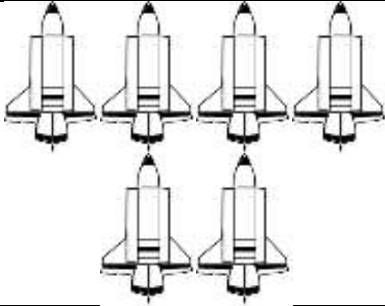


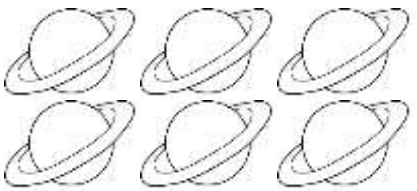




6)

15	<u>14</u>	13	12	<u>11</u>	10	<u>9</u>	8
----	-----------	----	----	-----------	----	----------	---



# GREATER, LESS AND EQUAL SHEET 4 ANSWERS


Circle the correct choice.

1)		<p>is greater than &gt;</p> <p>is equal to =</p> <p><b>is less than &lt;</b></p>	
2)		<p>is greater than &gt;</p> <p><b>is equal to =</b></p> <p>is less than &lt;</p>	
3)		<p>is greater than &gt;</p> <p>is equal to =</p> <p><b>is less than &lt;</b></p>	
4)		<p><b>is greater than &gt;</b></p> <p>is equal to =</p> <p>is less than &lt;</p>	
5)	<p style="font-size: 2em; text-align: center;">8</p>	<p>is greater than &gt;</p> <p>is equal to =</p> <p><b>is less than &lt;</b></p>	<p style="font-size: 2em; text-align: center;">9</p>
6)		<p>is greater than &gt;</p> <p><b>is equal to =</b></p> <p>is less than &lt;</p>	





## EASTER COLOUR BY NUMBER TWO CHICKS COMPLETED









## KEY

1 pale yellow	2 orange	3 light brown	4 light orange
5 brown	6 light green	7 green	8 dark green



# COUNTING MONEY: 10p AND 1p COINS

## SHEET 1 ANSWERS

	<u>11</u> p
	<u>13</u> p
	<u>22</u> p
	<u>31</u> p
	<u>24</u> p
	<u>33</u> p

Fill in the correct amounts

$$10p + 1p + 1p = \underline{12} \text{ p}$$

$$10p + 10p + 1p = \underline{21} \text{ p}$$


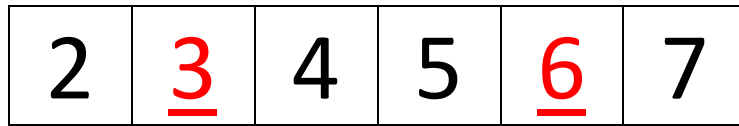
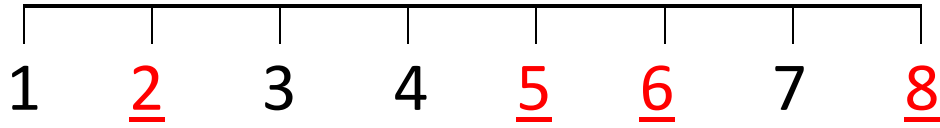
$$10p + 10p + 1p + 1p + 1p = \underline{23} \text{ p}$$

$$10p + 10p + 10p + 1p = \underline{31} \text{ p}$$



# NUMBERS TO 10 SHEET 2 ANSWERS

Fill in the missing numbers in these patterns.



How many spots? 8

