


MATH SALAMANDERS

YEAR 2 MATHS GRAB PACK 1

This pack is a selection of 10 Math sheets designed especially for Year 2 pupils.

All the worksheets are also available on our site.



In the pack is a range of number sheets, colouring pages, and puzzles.

There is also an answer pack which you can download separately.

CONTENTS			
1	Place Value Blocks Hundreds 1	6	Pick the Cards 1
2	Make 13 Challenge	7	2 Times Table Quiz
3	Fun Addition & Subtraction to 12	8	Easter Codebreaker 1A
4	Easter Colour By Number Addition to 10	9	Easter Egg Shape Colour in 1
5	Identify Simple 2D Shapes	10	Mental Maths Quiz 2:1

Please give us feedback on our pack – both what you liked and what sheets you would like to see more of by leaving a comment on the link below.

<https://www.math-salamanders.com/maths-grab-packs.html>

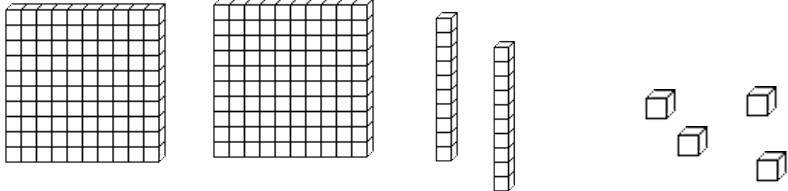
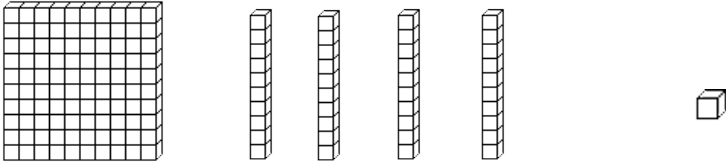
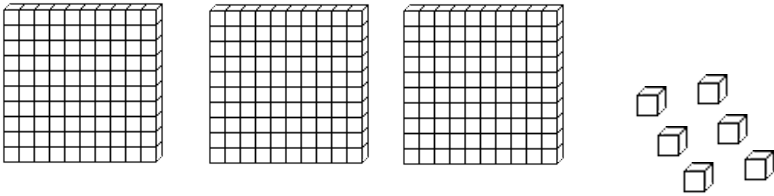
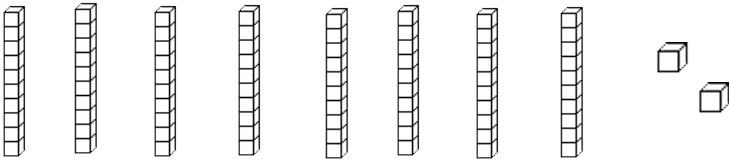
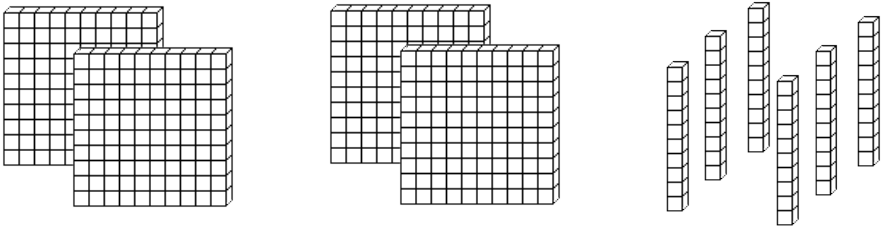
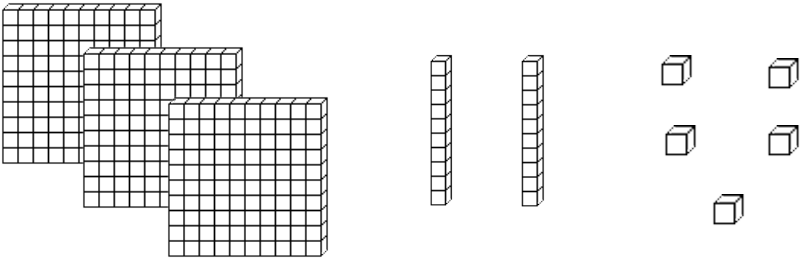


Free Math Sheets, Math Games and Math Help

MATH-SALAMANDERS.COM

PLACE VALUE BLOCKS: UP TO HUNDREDS SHEET 1

Help Flame Salamander match the blocks.

					
---	---	--	---	---	---

141

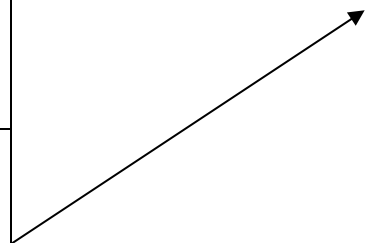
306

224

325

460

82




MAKE 13

0	1	2	3	4	5	6	7	8	9
---	---	---	---	---	---	---	---	---	---

Challenge 1)

- Pick any **two** digit cards with a total of 13.
- There are 3 possibilities. Can you find them?



1)	2)	3)
----	----	----

Challenge 2)

- Pick any **three** digit cards with a total of 13.
- There are 10 possibilities. How many can you find?



Challenge 3)

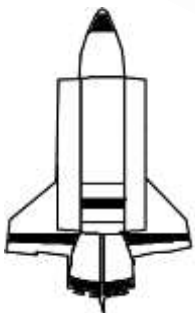
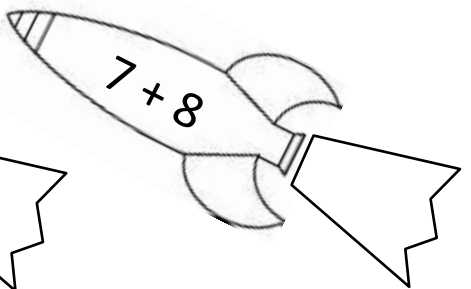
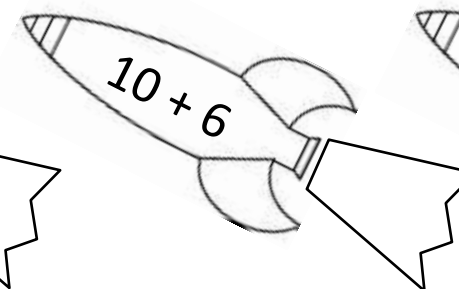
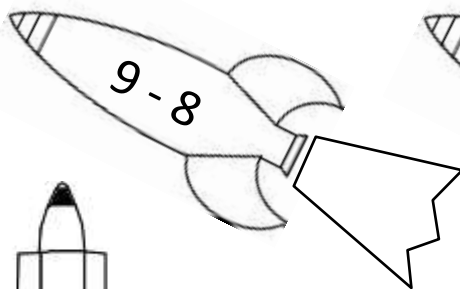
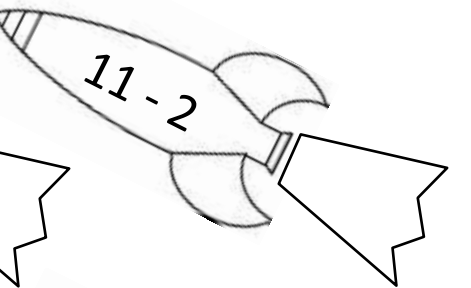
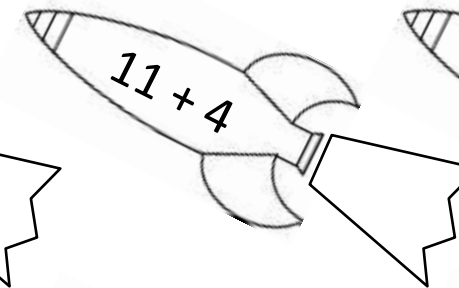
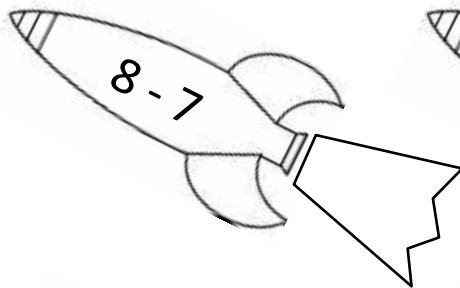
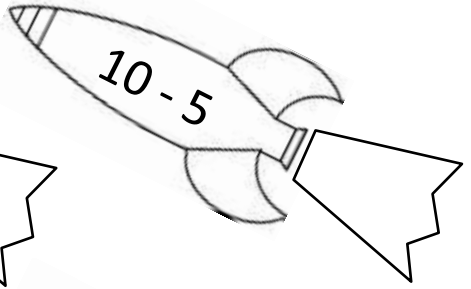
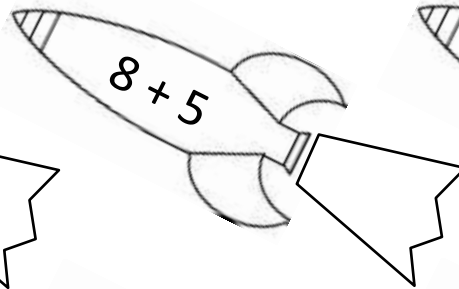
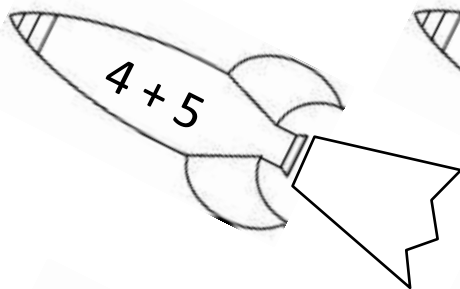
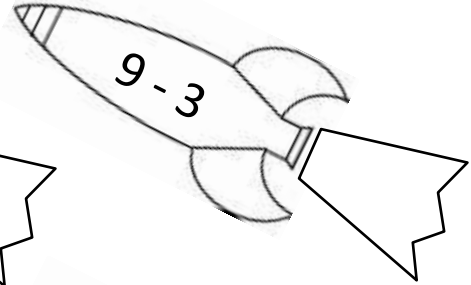
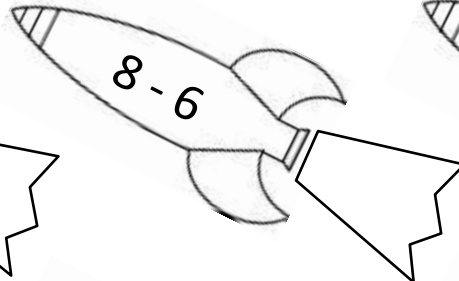
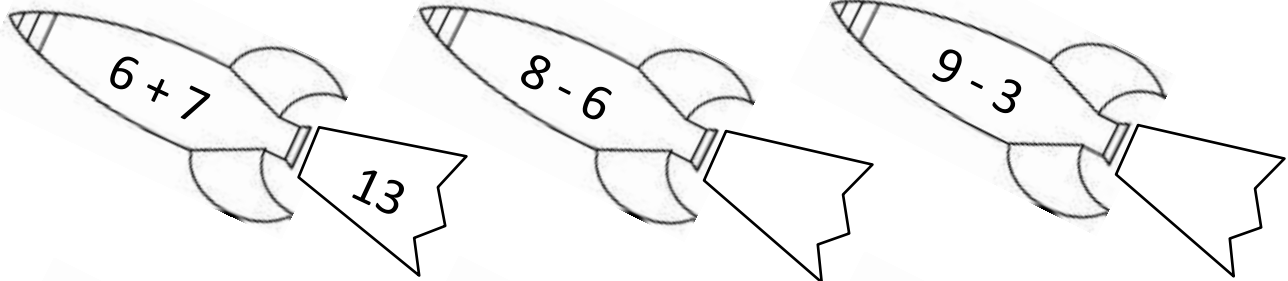
- Pick any **five** digit cards with a total of 13.
- How many ways can you find?



FUN ADDITION & SUBTRACTION TO 12 SHEET 1

Work out these subtraction facts. Write the answer in the rocket's trail.
The first one is done for you.

Shade the odd tails yellow and the even tails green.



EASTER COLOUR BY NUMBER: RABBIT JUMPING ADDITION TO 10

Shade in the squares using the key below.

5+2	1:6	7+0	2+6	4+4	8+0	3+5	2+6	7+1	4+4	3+5	1+7	0+8	6+2	1+7	4+4
3+4	6+1	2+5	8+0	5+3	2+6	4+4	1+7	2+1	0+4	5+5	2+5	8+0	6+2	1+7	5+3
4+3	0+7	4+4	2+6	7+1	6+2	4+4	0+8	0+3	2+2	0+3	7+2	7+1	3+5	2+6	0+8
7+1	8+0	6+2	1+7	4+4	3+5	1+7	6+2	8+0	4+0	2+2	1+8	6+2	5+3	1+7	4+4
6+2	1+7	4+4	3+5	7+1	0+8	6+2	4+5	8+1	1+9	3+1	0+4	2+7	3+5	8+0	5+3
2+6	8+0	3+5	6+2	0+8	2+8	6+4	2+7	3+6	7+3	8+2	4+5	0+0	6+4	6+2	1+7
6+2	6+3	2+7	3+5	5+5	6+3	7+2	1+9	5+4	3+6	2+8	4+6	9+1	3+6	1+1	0+8
3+5	4+6	8+2	7+3	4+5	3+7	8+2	7+3	2+8	6+4	1+8	6+3	2+2	5+5	0+2	2+6
6+2	3+1	6+4	1+8	5+4	7+3	6+4	5+5	4+6	8+1	2+8	6+4	5+4	4+4	3+5	7+1
1+7	6+2	4+5	7+3	1+8	3+6	1+2	3+1	1+7	6+2	0+4	7+2	6+3	4+6	6+2	1+7
2+5	8+1	6+4	2+8	1+3	2+1	0+8	5+3	1+7	0+8	6+2	4+4	4+6	5+4	9+0	7+1
4+4	1+9	4+6	3+7	0+4	5+3	4+4	1+7	2+3	0+5	3+4	6+1	8+0	4+0	7+3	3+5
2+6	8+2	0+9	7+3	6+2	7+1	1+0	3+3	2+4	5+0	4+1	0+7	3+4	3+5	4+4	1+7
5+3	5+5	6+4	2+6	0+8	1+1	0+1	1+1	6+0	1+5	2+3	1+6	7+0	4+4	1+7	6+2
7+1	2+2	0+3	4+4	1+7	6+0	2+4	0+1	1+0	5+1	3+2	1+4	1+6	8+0	3+5	1+7
8+0	4+4	3+5	7+1	2+5	1+5	3+3	4+2	1+1	0+2	0+6	4+1	5+0	2+6	1+7	4+4
3+5	6+2	1+7	8+0	6+1	3+4	5+1	6+0	2+0	1+0	4+2	3+3	0+5	3+5	8+0	1+7
0+8	3+5	7+1	2+6	7+0	5+2	1+6	3+3	2+4	0+2	0+1	1+5	4+4	6+2	3+5	7+1
1+4	3+2	0+5	4+1	3+2	3+4	0+7	1+6	5+1	1+5	1+1	2+3	1+4	5+0	1+4	2+3
5+0	2+3	5+0	3+2	1+4	0+5	6+1	0+7	5+2	5+0	3+2	1+4	2+3	0+5	3+2	4+1

KEY

0 black

1 or 2 pink

3 or 4 gray

5 green

6 orange

7 yellow

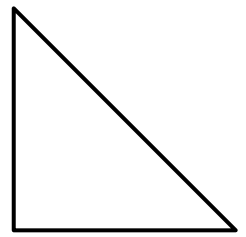

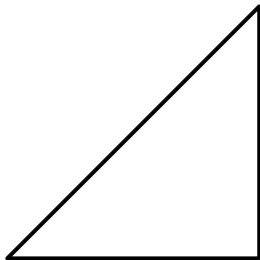


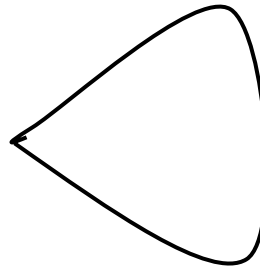
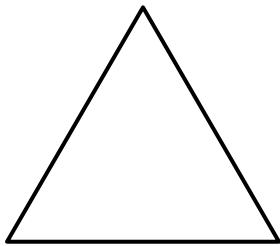
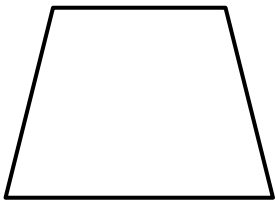

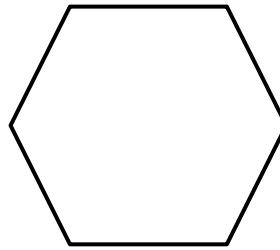

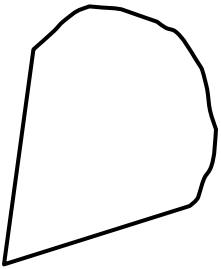
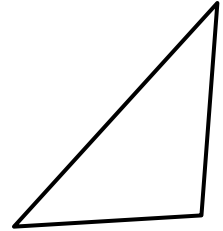

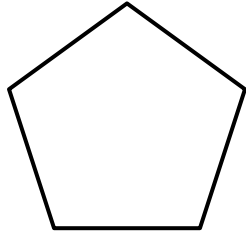
8 blue

9 or 10 white

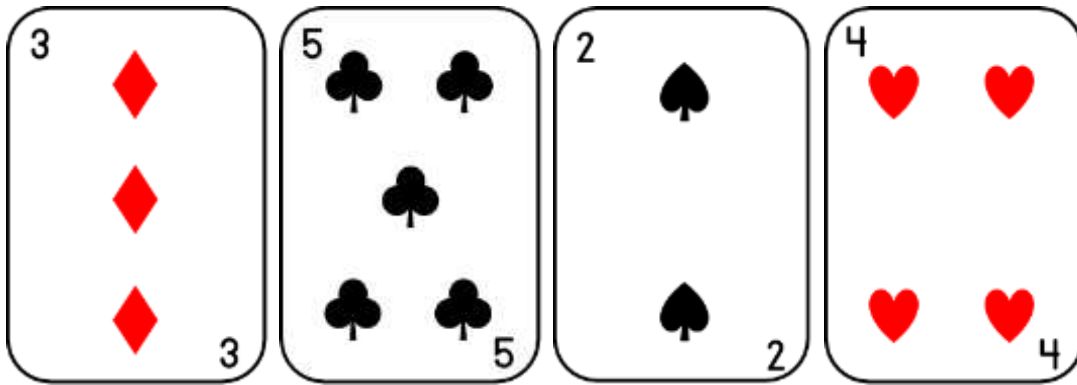


IDENTIFY SIMPLE 2D SHAPES 1

Shade the shapes as follows: squares - blue, triangles - green, circles - red, rectangles - yellow. Other shapes: leave white.



PICK THE CARDS 1



- Choose from the four cards above to make the total in the table below.
- You can use two, three or all four cards each time.

TOTAL	CARDS
8	3 + 5
7	
9	
10	
6	
11	
12	
14	

2 TIMES TABLE QUIZ 1

0	2	4	6	8	10	12	14	16	18	20
---	---	---	---	---	----	----	----	----	----	----

1) $4 \times 2 = \underline{\quad}$

2) $2 \times 6 = \underline{\quad}$

3) $3 \times 2 = \underline{\quad}$

4) $0 \times 2 = \underline{\quad}$

5) $7 \times 2 = \underline{\quad}$

6) $10 \times 2 = \underline{\quad}$

7) $2 \times 5 = \underline{\quad}$

8) $2 \times 8 = \underline{\quad}$

9) $2 \times 2 = \underline{\quad}$

10) $9 \times 2 = \underline{\quad}$

11) $2 \times 7 = \underline{\quad}$

12) $1 \times 2 = \underline{\quad}$

13) $2 \times 10 = \underline{\quad}$

14) $8 \times 2 = \underline{\quad}$

15) $2 \times 9 = \underline{\quad}$

16) $2 \times 2 = \underline{\quad}$

17) $2 \times 0 = \underline{\quad}$

18) $6 \times 2 = \underline{\quad}$

19) $2 \times 3 = \underline{\quad}$

20) $5 \times 2 = \underline{\quad}$

21) $\underline{\quad} \times 2 = 14$

22) $2 \times \underline{\quad} = 6$

23) $2 \times \underline{\quad} = 2$

24) $\underline{\quad} \times 2 = 20$

25) $\underline{\quad} \times 2 = 12$

26) $\underline{\quad} \times 2 = 4$

27) $2 \times \underline{\quad} = 18$

28) $2 \times \underline{\quad} = 8$

29) $\underline{\quad} \times 2 = 16$

30) $2 \times \underline{\quad} = 10$

31) $\underline{\quad} \times 2 = 6$

32) $2 \times \underline{\quad} = 12$

33) $\underline{\quad} \times 2 = 0$

34) $2 \times \underline{\quad} = 20$

35) $\underline{\quad} \times 2 = 18$

36) $2 \times \underline{\quad} = 2$

37) $\underline{\quad} \times 2 = 14$


38) $\underline{\quad} \times 2 = 10$

39) $2 \times \underline{\quad} = 6$

40) $\underline{\quad} \times 2 = 12$

SCORE

--



EASTER CODEBREAKER 1A

ADDITION AND SUBTRACTION FACTS TO 20

Use the clues to work out the answer to the Easter joke.

A	B	C	D	E	H	I	L	M	O	R	S	T	U	W	Y	-	!
1	2	3	4	5	6	7	8	9	10	11	12	13	14	15	16	17	18

Why couldn't the Easter Egg Chicks watch tv?

Letter	B																
Number	2																
Fact	10-8	2+3	12-9	10-9	7+7	2+10	15-10		8+5	15-9	8+9						



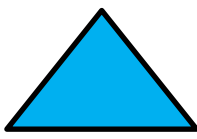


Letter																	
Number																	
Fact	13-8	11-4	3+8		17-14	8-7	15-13	2+6	14-9								


Letter																	
Number																	
Fact	3+12	7-6	20-8		4+9	19-9	5+8	5-4	14-6	17-9	4+12						

Letter																	
Number																	
Fact	5+7	12-9	8+3	8-7	16-7	11-9	20-12	2+3	12-8	10+8							


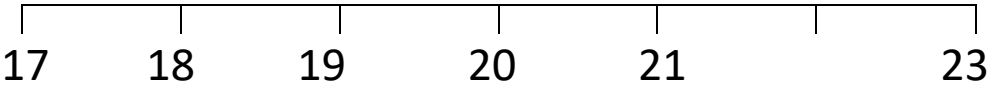





EASTER EGG SHAPE COLOUR IN 1

Red	Pink	Blue	Green	Yellow
				



MENTAL MATHS QUIZ 2:1

1)	$3 + 9$	
2)	Write down the next number: 18 19 20 21 22 23 24 _____	
3)	How many sides? 	
4)	$11 - 5$	
5)	Which number is missing from the number line? 	
6)	How many fish? 	
7)	What number comes after 26?	
8)	How much money? 	p
9)	I have 10 bananas. I eat 3 of them. How many are left?	
10)	Sally has 5 cakes. She makes 2 more. How many does she have now?	
11)	Draw the next shape in the sequence. 	
12)	Which number comes before 18?	

